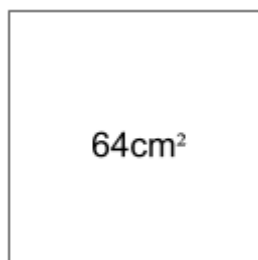


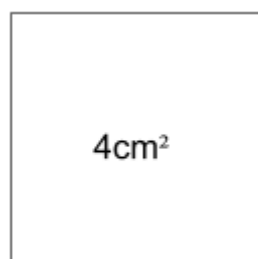
40 (area-perimeter) Paper 1**Name:** _____

1. Look at the square below. It has an area of 64cm^2 . What is its perimeter?
Write your answer in the space below.



_____cm

2. Look at the square below. It has an area of 4cm^2 . What is its perimeter?
Write your answer in the space below.



_____cm

3. Look at the square below. It has an area of 49cm^2 . What is its perimeter?
Write your answer in the space below.



_____cm

4. Look at the **square** below. It has an **area of 144cm^2** . What is its **perimeter**?
Write your answer in the space below.



_____cm

5. Look at the **square** below. It has an **area of 16cm^2** . What is its **perimeter**?
Write your answer in the space below.




_____cm

6. Look at the **square** below. It has an **area of 121cm^2** . What is its **perimeter**?
Write your answer in the space below.



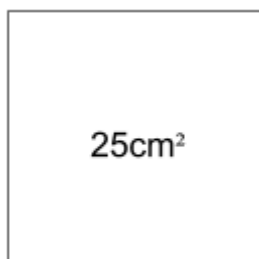
_____cm

7. Look at the **square** below. It has an **area of 100cm^2** . What is its **perimeter**?
Write your answer in the space below.



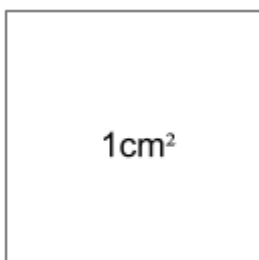
_____cm

8. Look at the **square** below. It has an **area of 25cm^2** . What is its **perimeter**?
Write your answer in the space below.



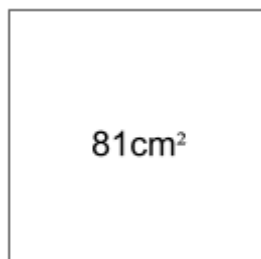
_____cm

9. Look at the **square** below. It has an **area of 1cm^2** . What is its **perimeter**?
Write your answer in the space below.



_____cm

10. Look at the **square** below. It has an **area of 81cm^2** . What is its **perimeter**?
Write your answer in the space below.



_____cm

11. Look at the **square** below. It has an **area of 9cm^2** . What is its **perimeter**?
Write your answer in the space below.



_____cm

12. Look at the **square** below. It has an **area of 169cm^2** . What is its **perimeter**?
Write your answer in the space below.



_____cm

Answers**1. 32****2. 8****3. 28****4. 48****5. 16****6. 44****7. 40****8. 20****9. 4****10.36****11.12****12.52**