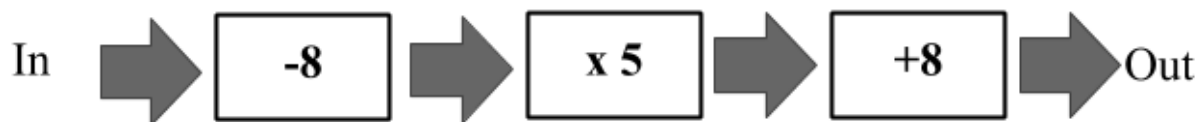


**Q1 (Function Machine) Day 22**Name: \_\_\_\_\_

---

1. Look at the function machine below.



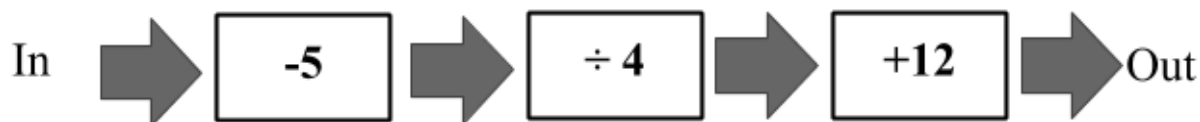
Use this function machine to **complete the question below**.

What number would need to be put **into** the function machine if **28** comes **out**?  
Write your answer in the space below.

---

---

2. Look at the function machine below.



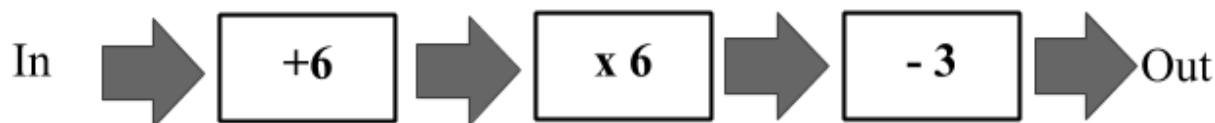
Use this function machine to **complete the question below**.

What number would come **out** of the function machine if **25** is entered? Write  
your answer in the space below.

---

---

3. Look at the function machine below.



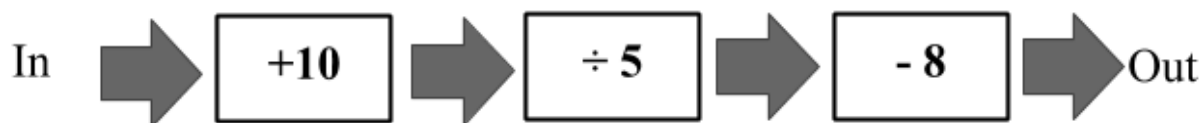
Use this function machine to **complete the question below**.

What number would need to be put **into** the function machine if **51** comes **out**?  
Write your answer in the space below.

---

---

4. Look at the function machine below.



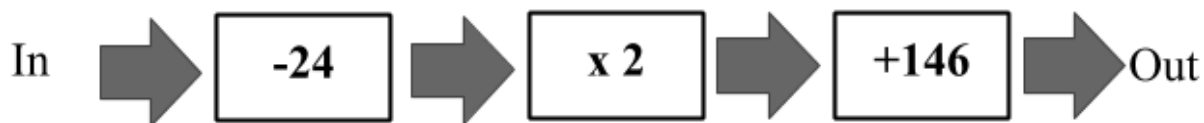
Use this function machine to **complete the question below**.

What number would come **out** of the function machine if **30** is entered? Write  
your answer in the space below.

---

---

5. Look at the function machine below.

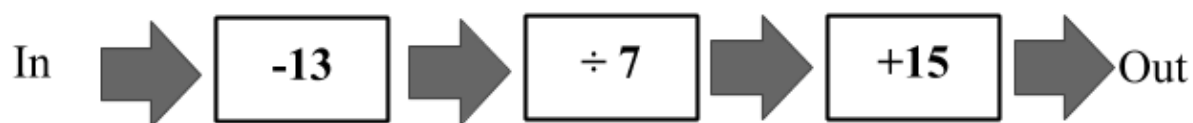


Use this function machine to **complete the question below**.

What number would need to be put **into** the function machine if **162** comes **out**?  
Write your answer in the space below.

---

6. Look at the function machine below.

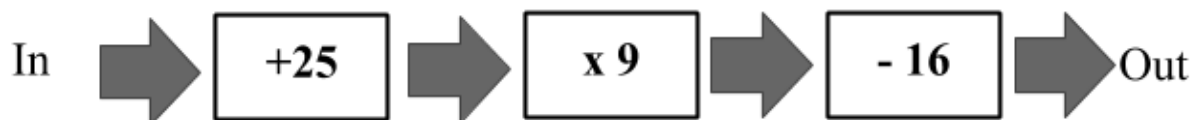


Use this function machine to **complete the question below**.

What number would come **out** of the function machine if **41** is entered? Write  
your answer in the space below.

---

7. Look at the function machine below.

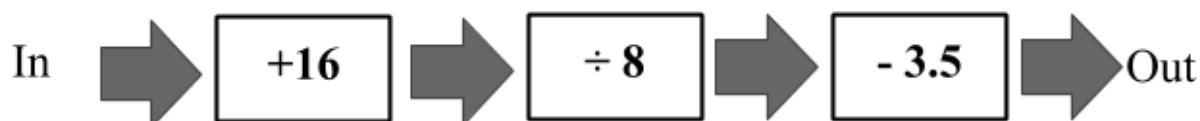


Use this function machine to **complete the question below**.

What number would come **out** of the function machine if **1** is entered? Write your answer in the space below.

---

8. Look at the function machine below.

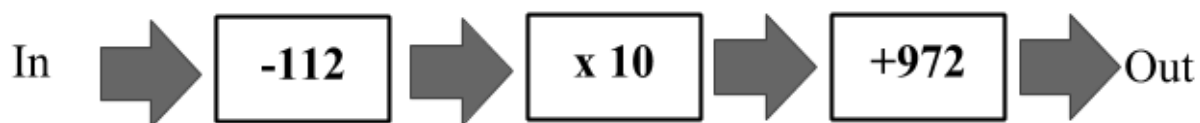


Use this function machine to **complete the question below**.

What number would need to be put **into** the function machine if **1.5** comes **out**? Write your answer in the space below.

---

9. Look at the function machine below.



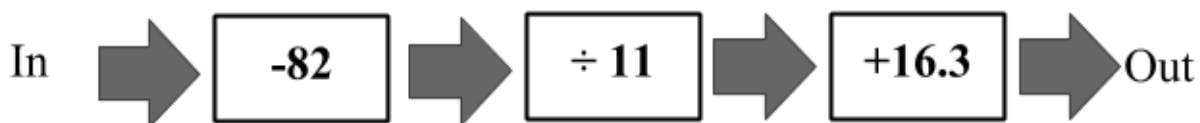
Use this function machine to **complete the question below**.

What number would come **out** of the function machine if **300** is entered? Write your answer in the space below.

---

---

10. Look at the function machine below.



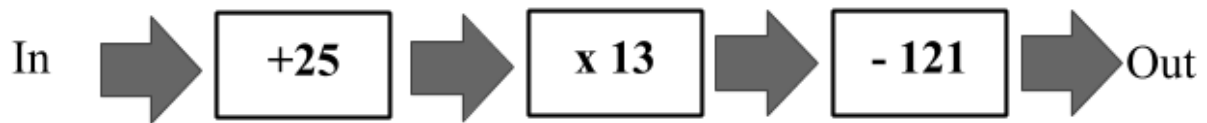
Use this function machine to **complete the question below**.

What number would need to be put **into** the function machine if **28.3** comes **out**? Write your answer in the space below.

---

---

11. Look at the function machine below.



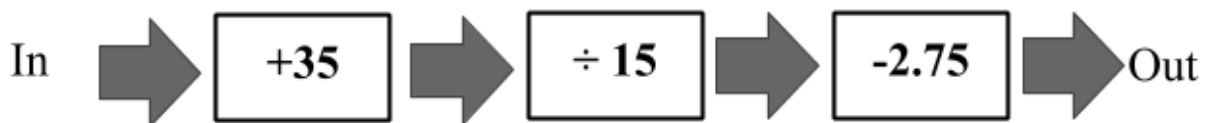
Use this function machine to **complete the question below**.

What number would come **out** of the function machine if **13** is entered? Write your answer in the space below.

---

---

12. Look at the function machine below.



Use this function machine to **complete the question below**.

What number would need to be put **into** the function machine if **8.25** comes **out**? Write your answer in the space below.

---

---

**Answers**

- 1. 12**
- 2. 17**
- 3. 3**
- 4. 0**
- 5. 32**
- 6. 19**
- 7. 218**
- 8. 24**
- 9. 2852**
- 10.214**
- 11.373**
- 12.130**