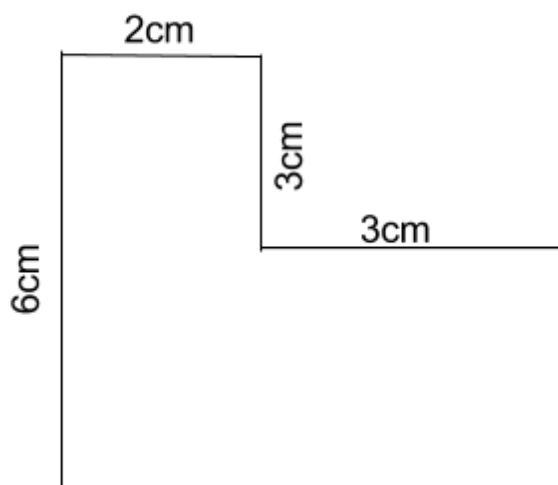


Q4 (Perimeter Compound shape) Day 27 Name: _____

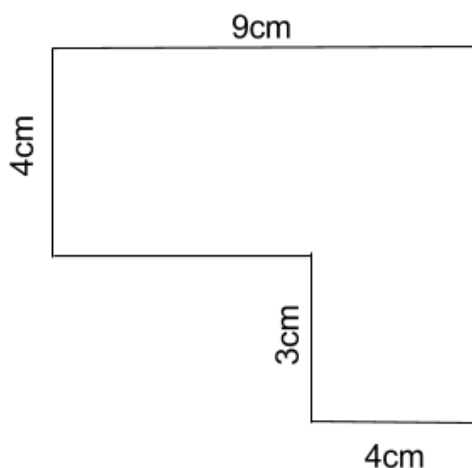
1. Look at the shape below.



Find the **perimeter** of the shape? Write your answer in the space below.

_____ cm

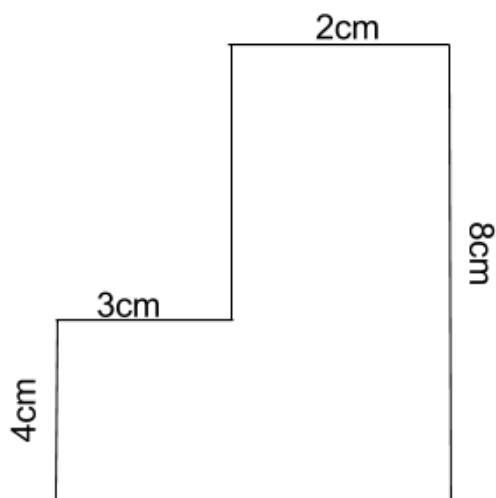
2. Look at the shape below.



Find the **perimeter** of the shape? Write your answer in the space below.

_____ cm

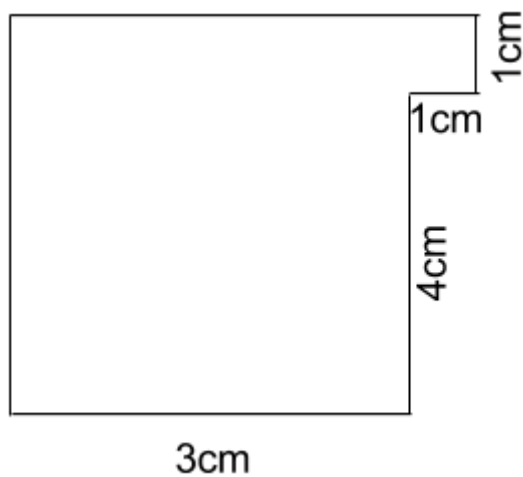
3. Look at the shape below.



Find the **perimeter** of the shape? Write your answer in the space below.

_____ cm

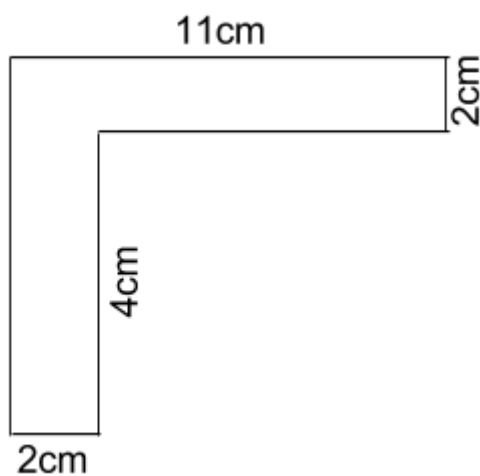
4. Look at the shape below.



Find the **perimeter** of the shape? Write your answer in the space below.

_____ cm

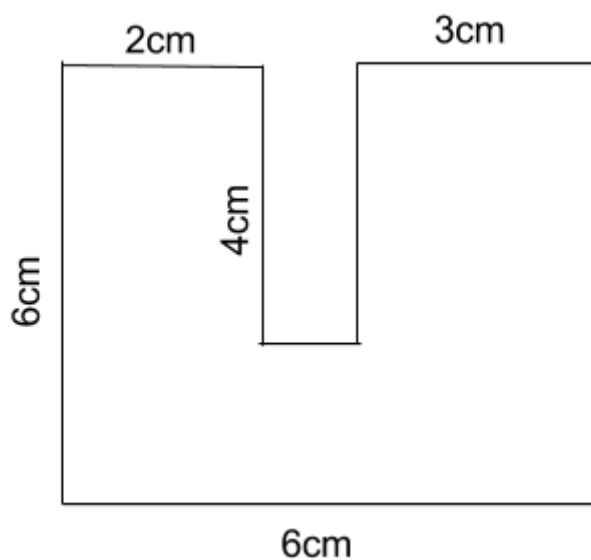
5. Look at the shape below.



Find the **perimeter** of the shape? Write your answer in the space below.

_____ cm

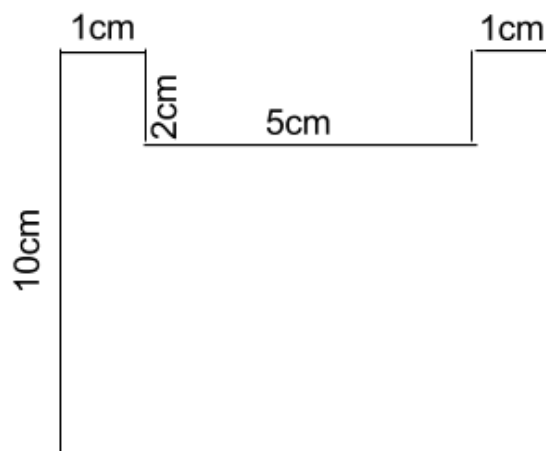
6. Look at the shape below.



Find the **perimeter** of the shape? Write your answer in the space below.

_____ cm

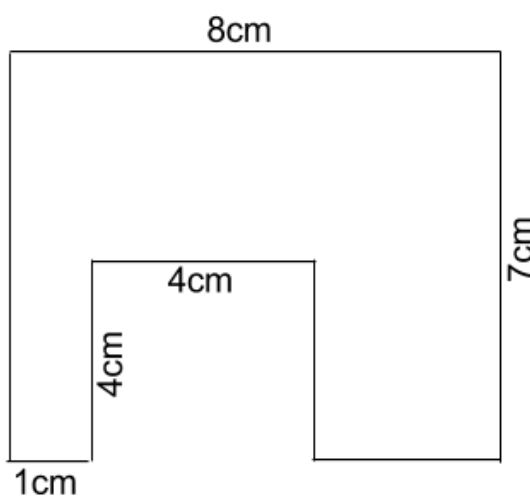
7. Look at the shape below.



Find the **perimeter** of the shape? Write your answer in the space below.

_____ cm

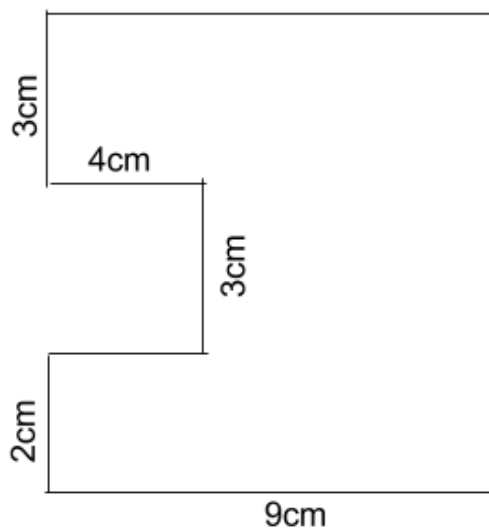
8. Look at the shape below.



Find the **perimeter** of the shape? Write your answer in the space below.

_____ cm

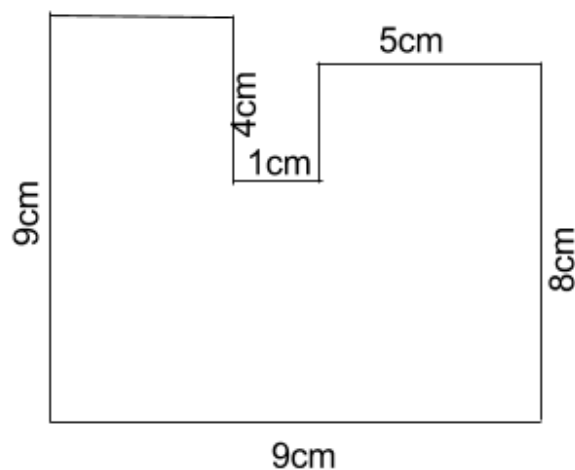
9. Look at the shape below.



Find the **perimeter** of the shape? Write your answer in the space below.

_____ cm

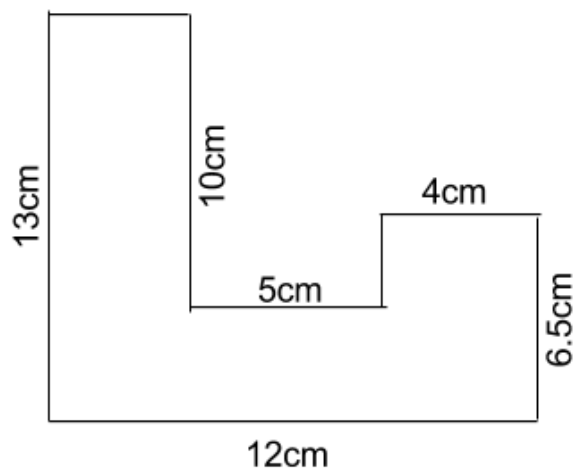
10. Look at the shape below.



Find the **perimeter** of the shape? Write your answer in the space below.

_____ cm

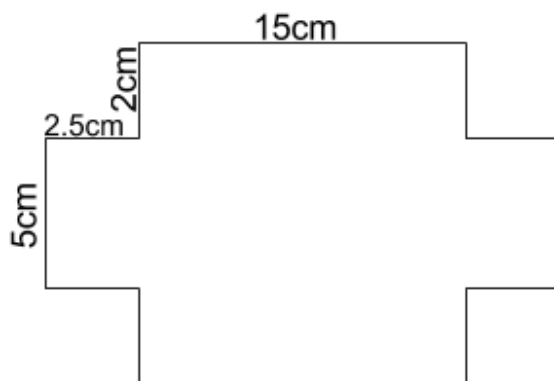
11. Look at the shape below.



Find the **perimeter** of the shape? Write your answer in the space below.

_____ cm

12. Look at the shape below.



Find the **perimeter** of the shape? Write your answer in the space below.

_____ cm

Answers**1. 22****2. 32****3. 26****4. 18****5. 34****6. 32****7. 38****8. 38****9. 42****10.42****11.57****12.58**