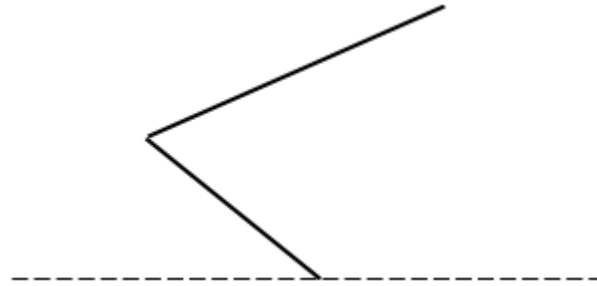


**Q5 (Reflection) Day 34**

Name: \_\_\_\_\_

1. Look at the figure below. There is a shape and **mirror line**.



If the shape is **reflected** in the mirror line **what letter** from the alphabet will be created? Write your answer in the space below.

\_\_\_\_\_

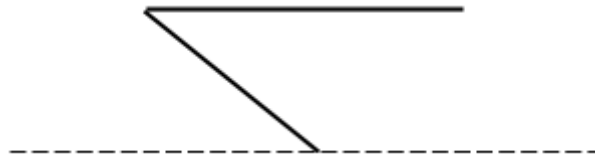
2. Look at the figure below. There is a shape and **mirror line**.



If the shape is **reflected** in the mirror line **what letter** from the alphabet will be created? Write your answer in the space below.

\_\_\_\_\_

3. Look at the figure below. There is a shape and **mirror line**.



If the shape is **reflected** in the mirror line **what letter** from the alphabet will be created? Write your answer in the space below.

---

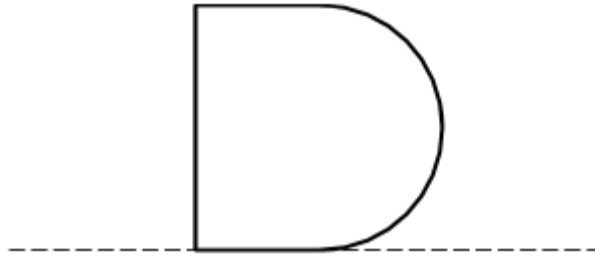
4. Look at the figure below. There is a shape and **mirror line**.



If the shape is **reflected** in the mirror line **what letter** from the alphabet will be created? Write your answer in the space below.

---

5. Look at the figure below. There is a shape and **mirror line**.

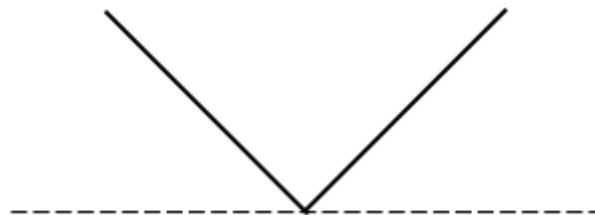


If the shape is **reflected** in the mirror line **what letter** from the alphabet will be created? Write your answer in the space below.

---

---

6. Look at the figure below. There is a shape and **mirror line**.

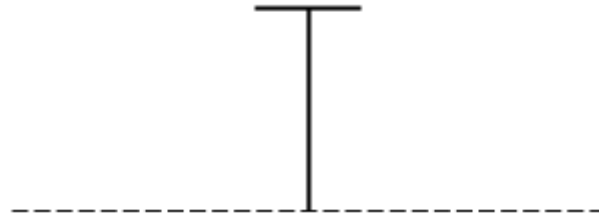


If the shape is **reflected** in the mirror line **what letter** from the alphabet will be created? Write your answer in the space below.

---

---

7. Look at the figure below. There is a shape and **mirror line**.



If the shape is **reflected** in the mirror line **what letter** from the alphabet will be created? Write your answer in the space below.

---

---

8. Look at the figure below. There is a shape and **mirror line**.

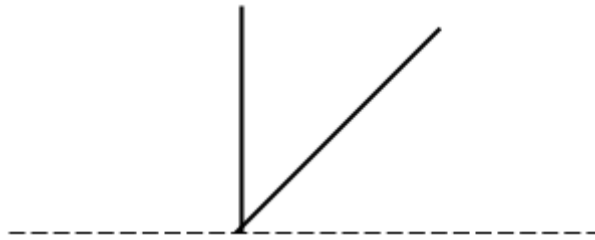


If the shape is **reflected** in the mirror line **what letter** from the alphabet will be created? Write your answer in the space below.

---

---

9. Look at the figure below. There is a shape and **mirror line**.



If the shape is **reflected** in the mirror line **what letter** from the alphabet will be created? Write your answer in the space below.

---

---

10. Look at the figure below. There is a shape and **mirror line**.

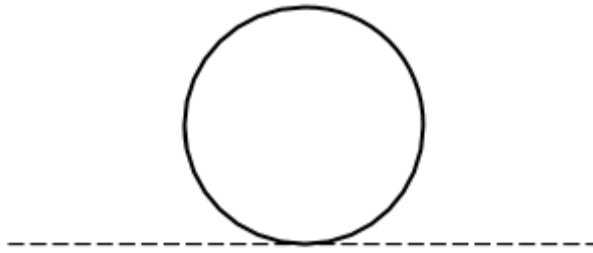


If the shape is **reflected** in the mirror line **what letter** from the alphabet will be created? Write your answer in the space below.

---

---

11. Look at the figure below. There is a shape and **mirror line**.



If the shape is **reflected** in the mirror line **what number** will be created? Write your answer in the space below.

---

---

12. Look at the figure below. There is a shape and **mirror line**.



If the shape is **reflected** in the mirror line **what number** will be created? Write your answer in the space below.

---

---

**Answers**

- 1. W or M**
- 2. H**
- 3. M or W**
- 4. E**
- 5. B**
- 6. X**
- 7. I**
- 8. D**
- 9. K**
- 10.C**
- 11.8**
- 12.3**