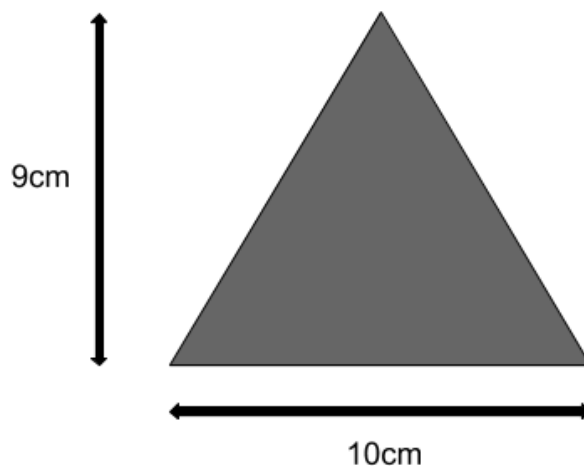


Q2 (Area of Triangle) Day 38

Name: _____

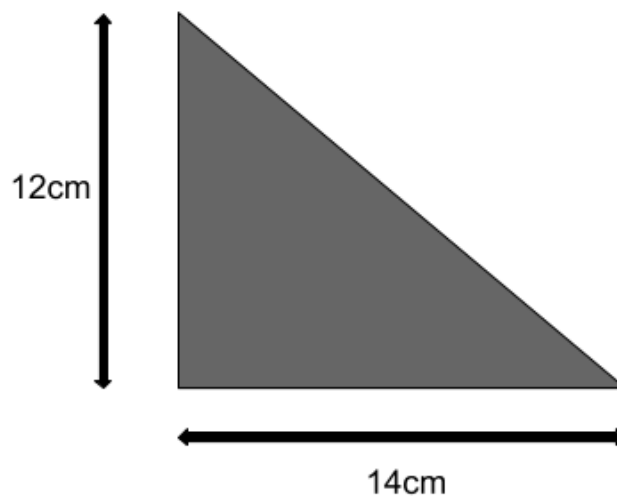
1. Look at the triangle below.



What is the **area** of the triangle? Write your answer in the space below.

_____ cm²

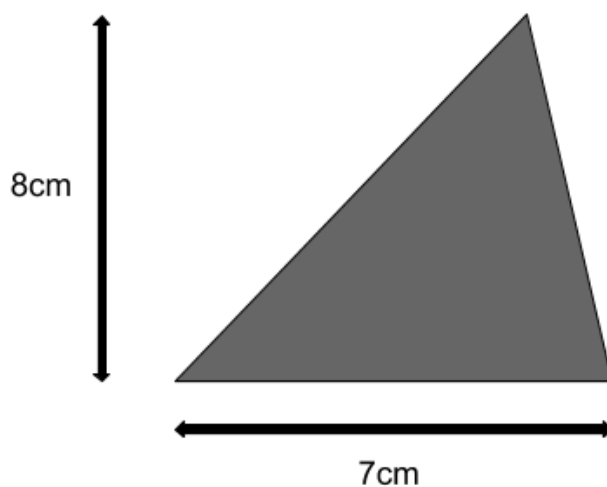
2. Look at the triangle below.



What is the **area** of the triangle? Write your answer in the space below.

_____ cm²

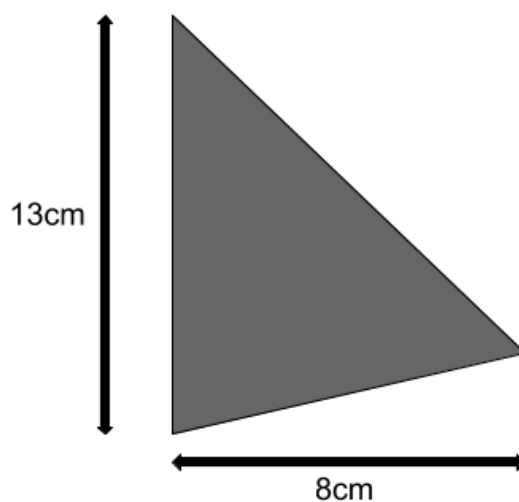
3. Look at the triangle below.



What is the **area** of the triangle? Write your answer in the space below.

_____ cm²

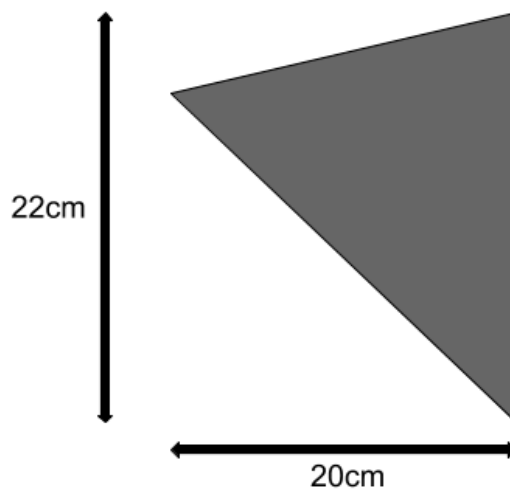
4. Look at the triangle below.



What is the **area** of the triangle? Write your answer in the space below.

_____ cm²

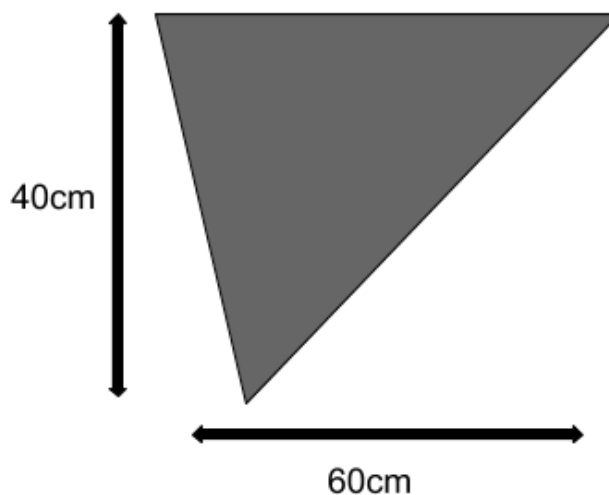
5. Look at the triangle below.



What is the **area** of the triangle? Write your answer in the space below.

_____ cm²

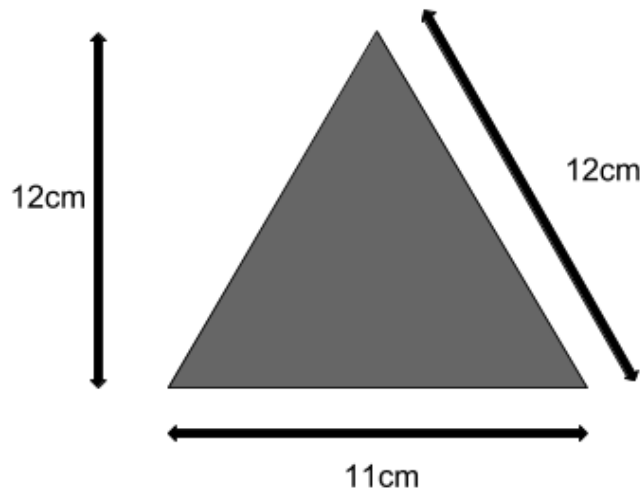
6. Look at the triangle below.



What is the **area** of the triangle? Write your answer in the space below.

_____ cm²

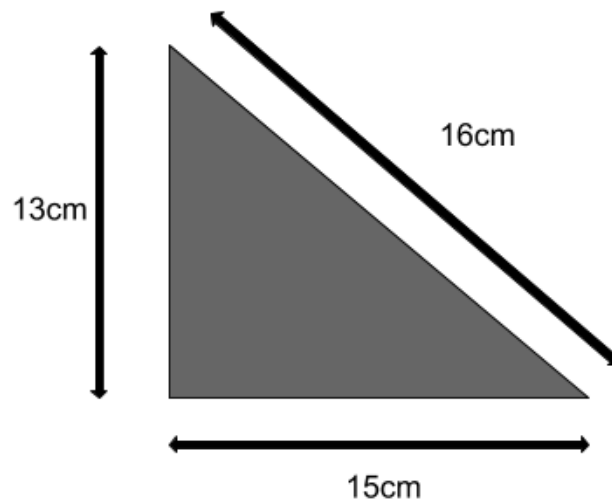
7. Look at the triangle below.



What is the **area** of the triangle? Write your answer in the space below.

_____ cm²

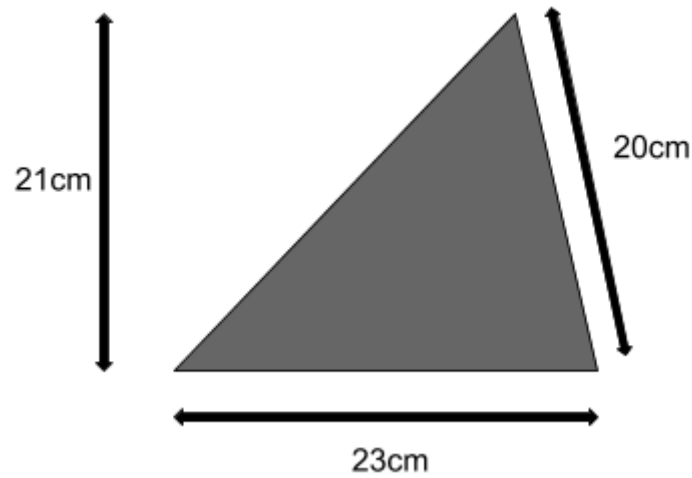
8. Look at the triangle below.



What is the **area** of the triangle? Write your answer in the space below.

_____ cm²

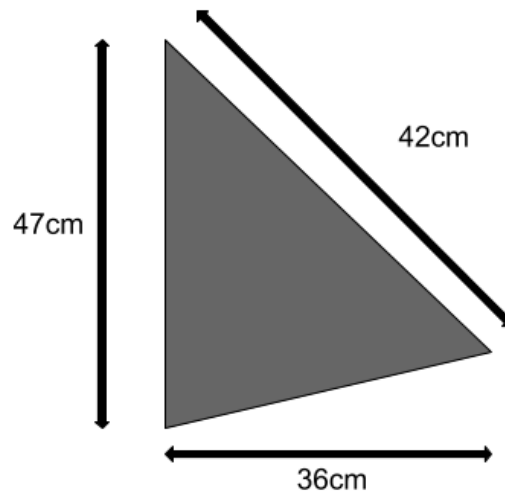
9. Look at the triangle below.



What is the **area** of the triangle? Write your answer in the space below.

_____ cm²

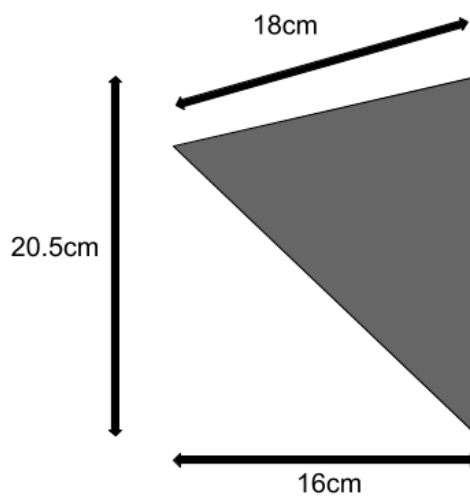
10. Look at the triangle below.



What is the **area** of the triangle? Write your answer in the space below.

_____ cm²

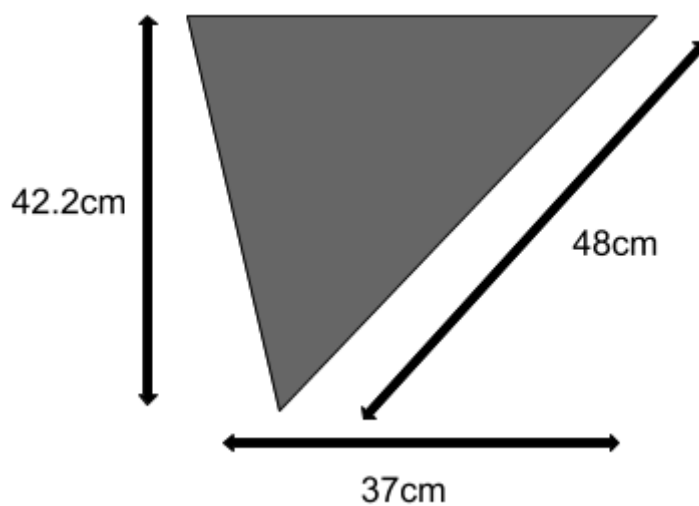
11. Look at the triangle below.



What is the **area** of the triangle? Write your answer in the space below.

_____ cm²

12. Look at the triangle below.



What is the **area** of the triangle? Write your answer in the space below.

_____ cm²

Answers

- 1. 45**
- 2. 84**
- 3. 28**
- 4. 52**
- 5. 220**
- 6. 1200**
- 7. 66**
- 8. 97.5**
- 9. 241.5**
- 10.846**
- 11.164**
- 12.780.7**