


Q2 (Symmetry) Day 40 Name: _____


1. Look at the square below.



How many **lines of symmetry** does the square have? Write your answer in the space below.

_____ lines of symmetry

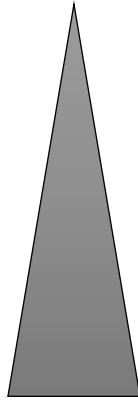
2. Look at the rectangle below.



How many **lines of symmetry** does the rectangle have? Write your answer in the space below.

_____ lines of symmetry

3. Look at the **isosceles triangle** below.



How many **lines of symmetry** does the isosceles triangle have? Write your answer in the space below.

_____ lines of symmetry

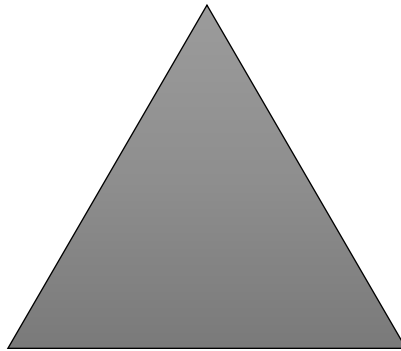
4. Look at the **isosceles trapezium** below.



How many **lines of symmetry** does the isosceles trapezium have? Write your answer in the space below.

_____ lines of symmetry

5. Look at the **equilateral triangle** below.



How many **lines of symmetry** does the equilateral triangle have? Write your answer in the space below.

_____ lines of symmetry


6. Look at the **parallelogram** below.



How many **lines of symmetry** does the parallelogram have? Write your answer in the space below.

_____ lines of symmetry


7. Look at the **rhombus** below.



How many **lines of symmetry** does the rhombus have? Write your answer in the space below.

_____ lines of symmetry

8. Look at the shape below.



How many **lines of symmetry** does the shape have? Write your answer in the space below.

_____ lines of symmetry


9. Look at the shape below.



How many **lines of symmetry** does the shape have? Write your answer in the space below.

_____ lines of symmetry


10. Look at the shape below.



How many **lines of symmetry** does the shape have? Write your answer in the space below.

_____ lines of symmetry


11. Look at the **regular pentagon** below.



How many **lines of symmetry** does the regular pentagon have? Write your answer in the space below.

_____ lines of symmetry

12. Look at the shape below.



How many **lines of symmetry** does the shape have? Write your answer in the space below.

_____ lines of symmetry

Answers**1. 4****2. 2****3. 1****4. 1****5. 3****6. 0****7. 2****8. 4****9. 5****10.0****11.5****12.1**