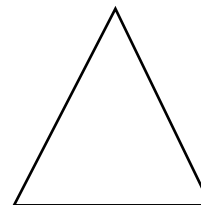
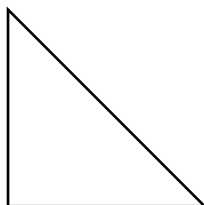




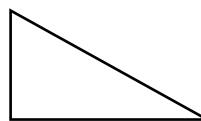


Q5 (Adding Angles) Day 38 Name: _____

1. Look at the **3 shapes** below. What is **the total of all the angles** in the **quadrilateral** and in the **two triangles**? Write your answer in the space below.



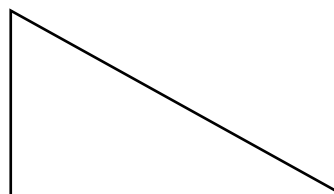

_____ °

2. Look at the **4 shapes** below. What is **the total of all the angles** in the **quadrilateral** and in the **three triangles**? Write your answer in the space below.



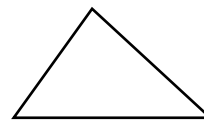
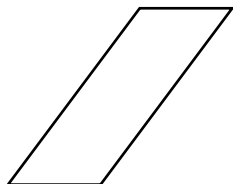
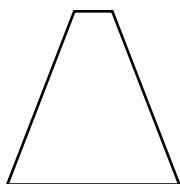
_____ °

3. Look at the **3 shapes** below. What is **the total of all the angles** in the two **quadrilaterals** and in the **triangle**? Write your answer in the space below.



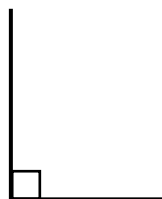
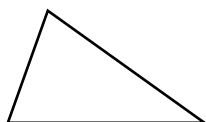

_____ °

4. Look at the **4 shapes** below. What is **the total of all the angles** in the **three quadrilaterals** and in the **triangle**? Write your answer in the space below.



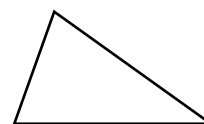
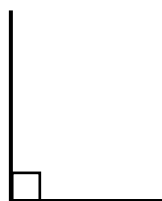
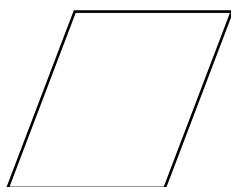
_____ °

5. Look at the **3 shapes** below. What is **the total of all the angles** in the **quadrilateral, triangle and the right angle**? Write your answer in the space below.



_____ °

6. Look at the **4 shapes** below. What is **the total of all the angles** in the **quadrilateral, the triangle, the right angle and the straight line**? Write your answer in the space below.



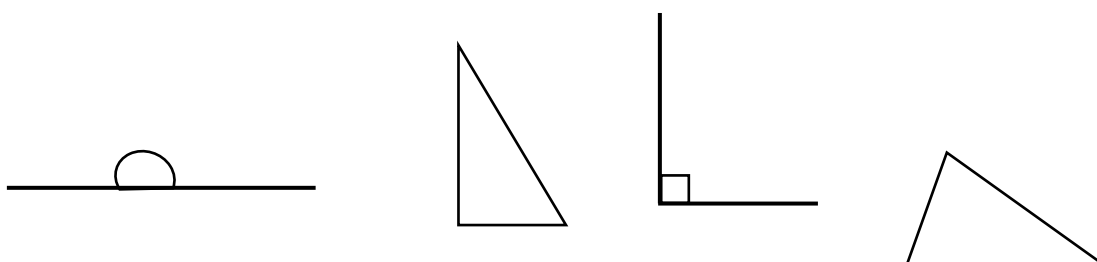
_____ °

7. Look at the **4 shapes** below. What is **the total of all the angles** in the four **quadrilaterals**? Write your answer in the space below.



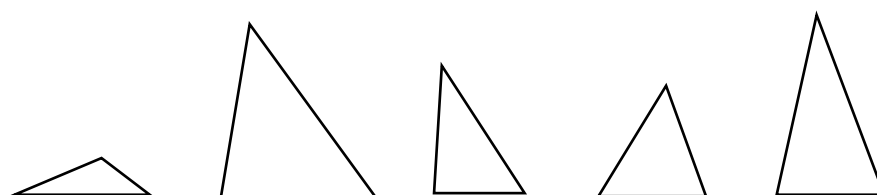
_____ °

8. Look at the **4 shapes** below. What is **the total of all the angles** in the two **triangles, the right angle and the straight line**? Write your answer in the space below.



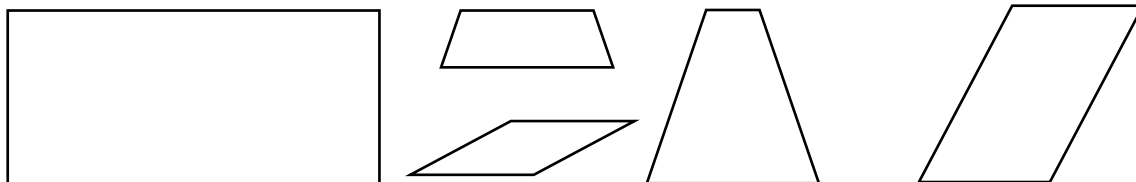
_____ °

9. Look at the **5 shapes** below. What is **the total of all the angles** in the **5 triangles**? Write your answer in the space below.



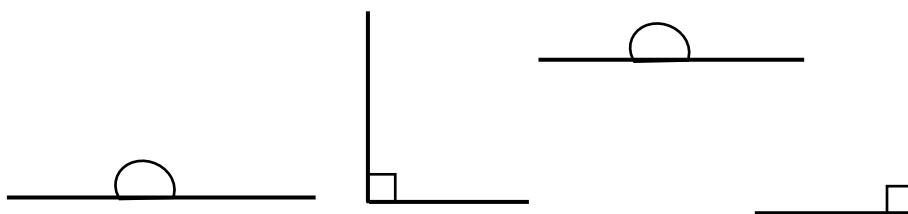
_____ °

10. Look at the **5 shapes** below. What is **the total of all the angles** in the five **quadrilaterals**? Write your answer in the space below.



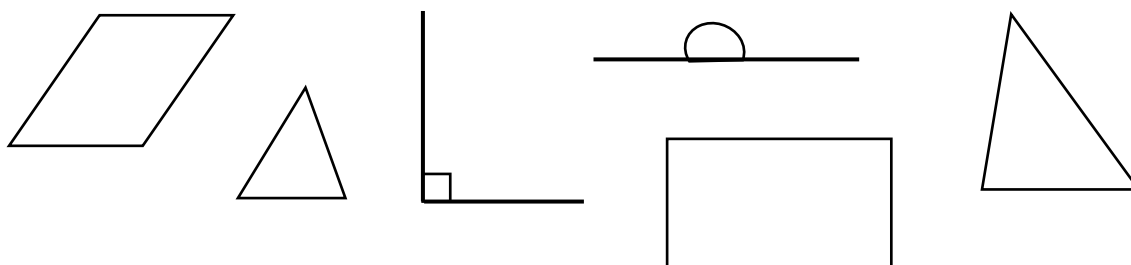
_____ °

11. Look at the **4 shapes** below. What is **the total of all the angles** in the two **right angles** and the two **straight lines**? Write your answer in the space below.



_____ °

12. Look at the **6 shapes** below. What is **the total of all the angles** in the two **quadrilaterals**, the two **triangles** the **right angle** and the **straight line**? Write your answer in the space below.



_____ °

Answers

1. 720
2. 900
3. 900
4. 1260
5. 630
6. 810
7. 1440
8. 630
9. 900
10. 1800
11. 540
12. 1350