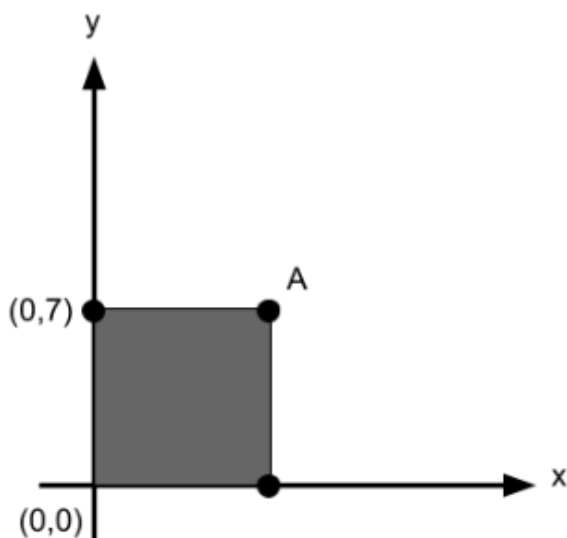


Q2 (Coordinates) Day 60

Name: _____

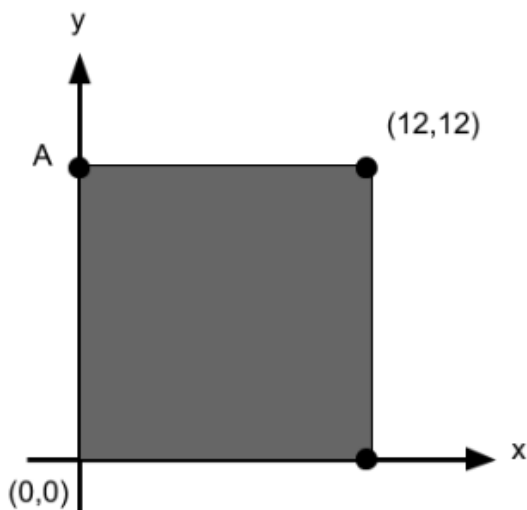
1. Look at the diagram below, it contains a **square**.



What is the coordinate of point A? Write your answer in the space below.

(_____ , _____)

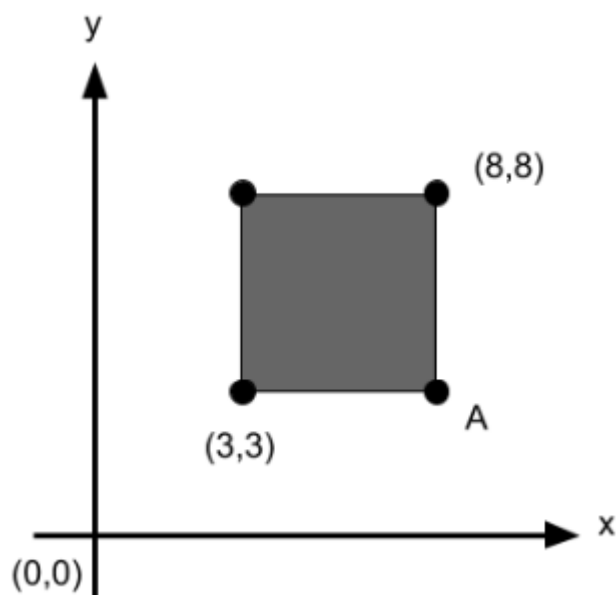
2. Look at the diagram below, it contains a **square**.



What is the coordinate of point A? Write your answer in the space below.

(_____ , _____)

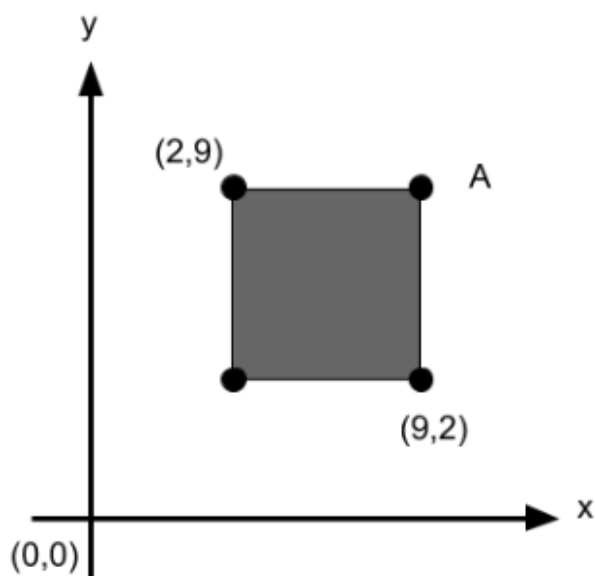
3. Look at the diagram below, it contains a **square**.



What is the coordinate of point A? Write your answer in the space below.

(_____ , _____)

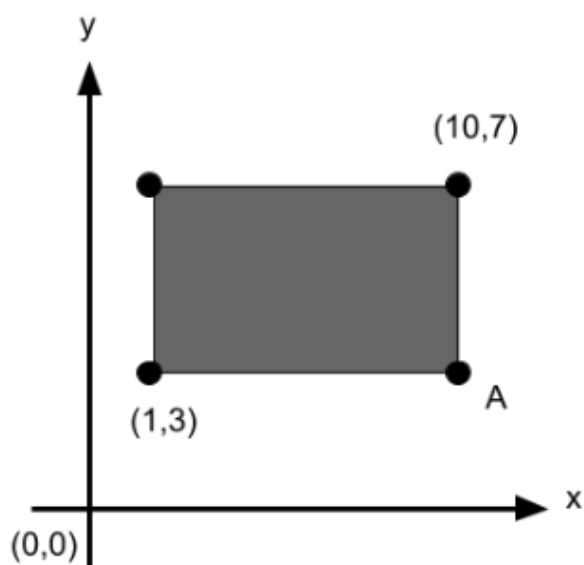
4. Look at the diagram below, it contains a **square**.



What is the coordinate of point A? Write your answer in the space below.

(_____ , _____)

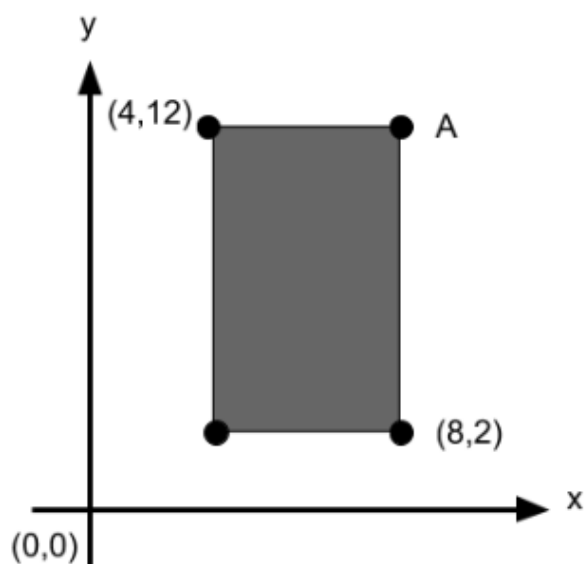
5. Look at the diagram below, it contains a **rectangle**.



What is the coordinate of point A? Write your answer in the space below.

(_____ , _____)

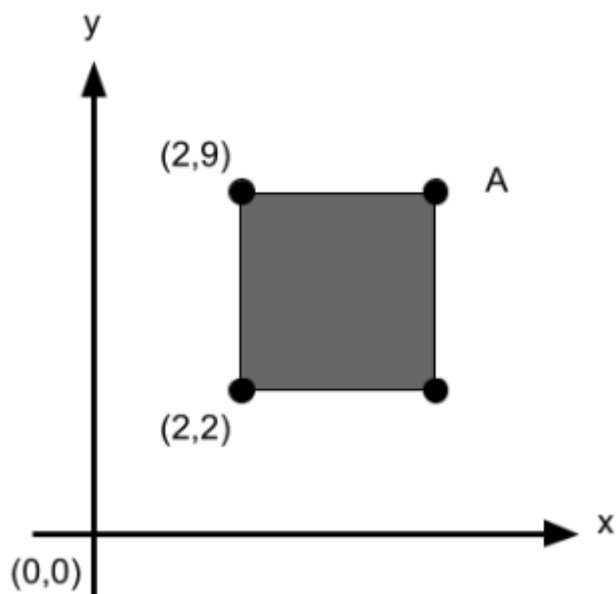
6. Look at the diagram below, it contains a **rectangle**.



What is the coordinate of point A? Write your answer in the space below.

(_____ , _____)

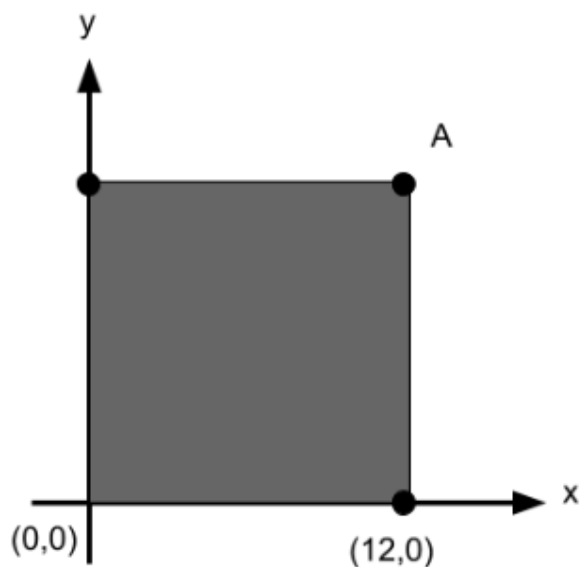
7. Look at the diagram below, it contains a **square**.



What is the coordinate of point A? Write you answer in the space below.

(_____ , _____)

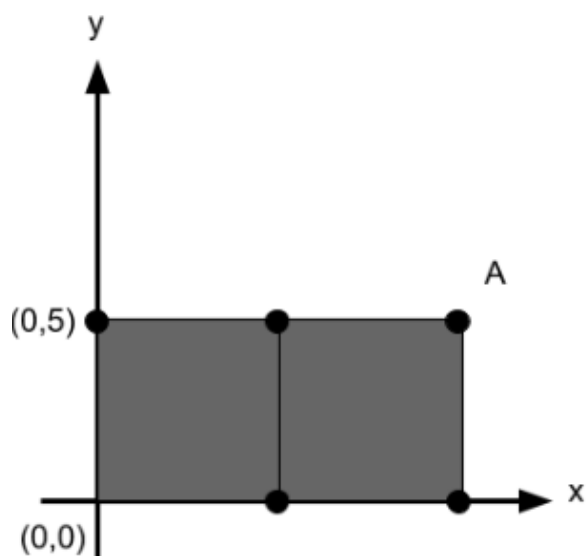
8. Look at the diagram below, it contains a **square**.



What is the coordinate of point A? Write you answer in the space below.

(_____ , _____)

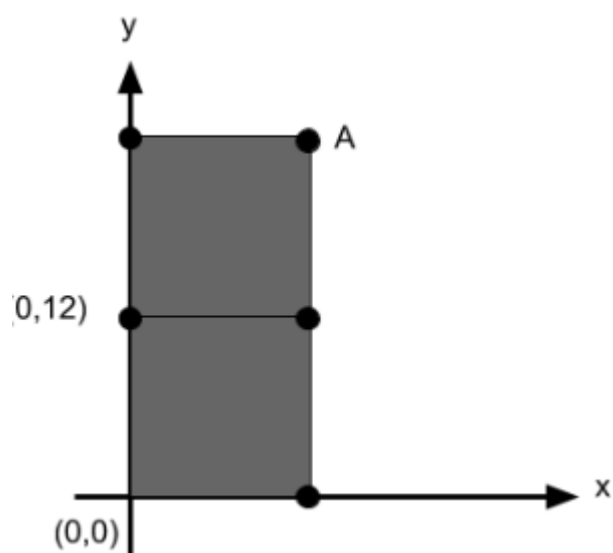
9. Look at the diagram below, it has two **identical squares**.



What is the coordinate of point A? Write your answer in the space below.

(_____ , _____)

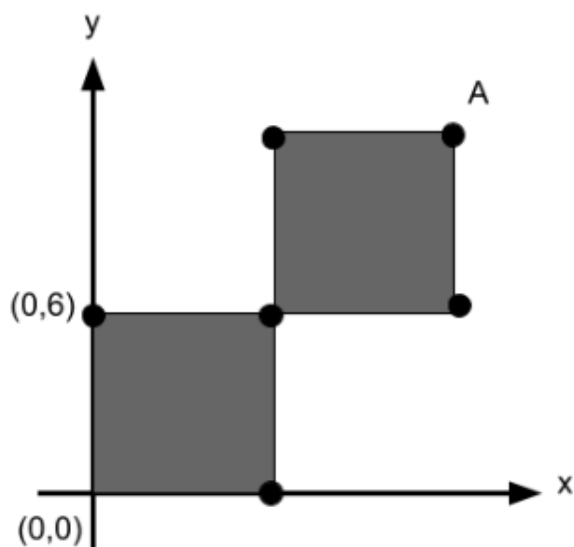
10. Look at the diagram below, it has two **identical squares**.



What is the coordinate of point A? Write your answer in the space below.

(_____ , _____)

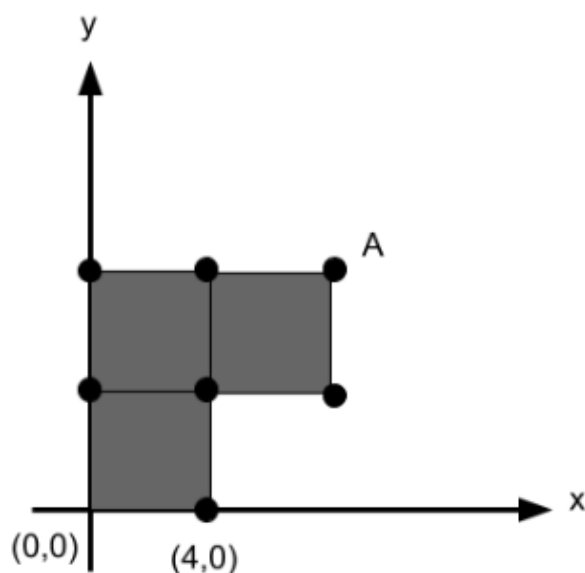
11. Look at the diagram below, it has two **identical squares**.



What is the coordinate of point A? Write your answer in the space below.

(_____ , _____)

12. Look at the diagram below, it has three **identical squares**.



What is the coordinate of point A? Write your answer in the space below.

(_____ , _____)

Answers

- 1. (7,7)**
- 2. (0,12)**
- 3. (8,3)**
- 4. (9,9)**
- 5. (10,3)**
- 6. (8,12)**
- 7. (9,9)**
- 8. (12,12)**
- 9. (10,5)**
- 10.(12,24)**
- 11.(12,12)**
- 12.(8,8)**