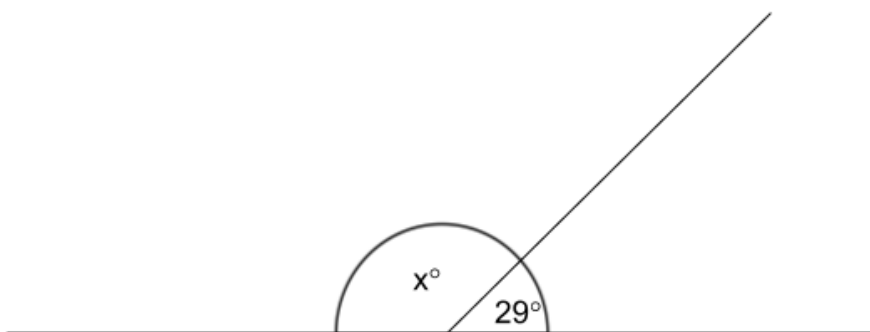


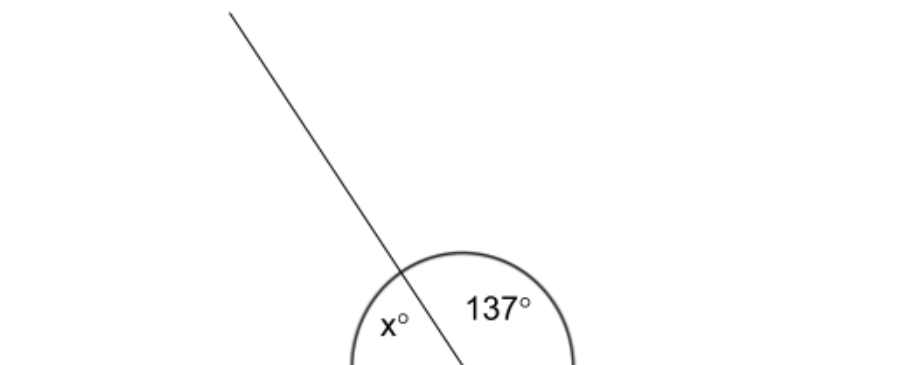
Q3 (Angle Straight line) Day 58 Name: _____

1. Look below at the straight line. What is the size of angle x ? Write your answer in the space below.



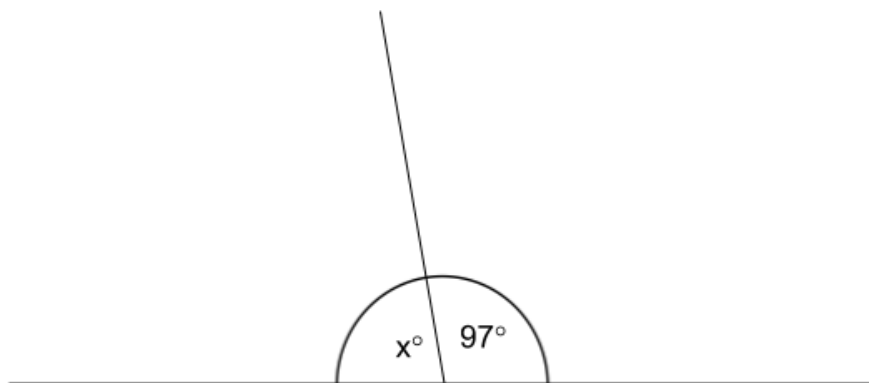
$$x^\circ = \underline{\hspace{2cm}}$$

2. Look below at the straight line. What is the size of angle x ? Write your answer in the space below.



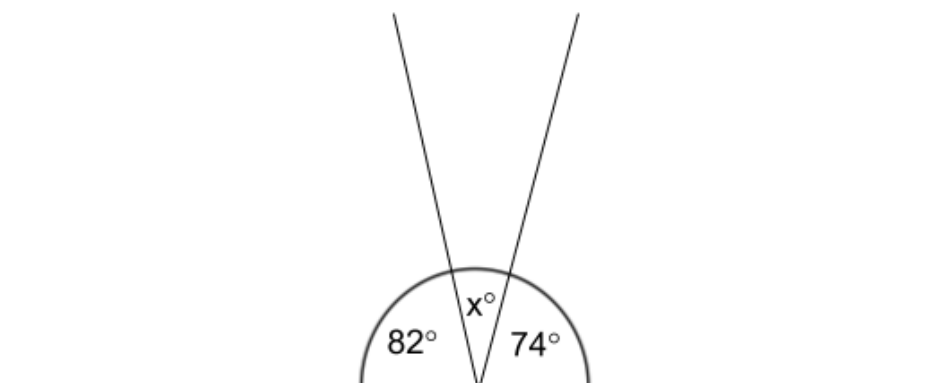
$$x^\circ = \underline{\hspace{2cm}}$$

3. Look below at the straight line. What is the size of angle x ? Write your answer in the space below.



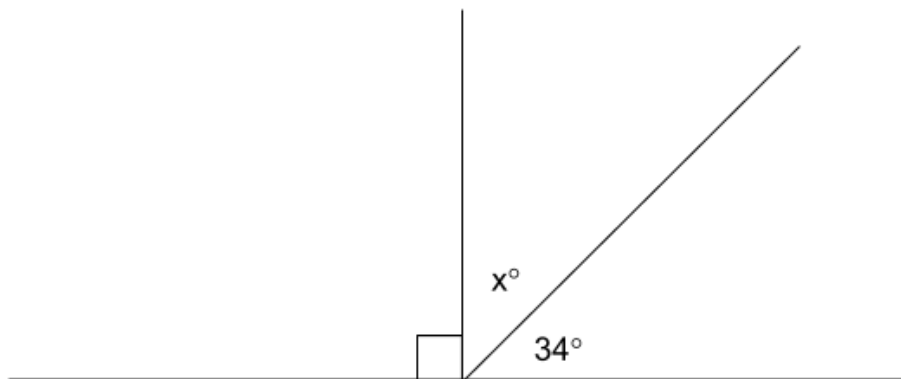
$x^\circ =$ _____

4. Look below at the straight line. What is the size of angle x ? Write your answer in the space below.



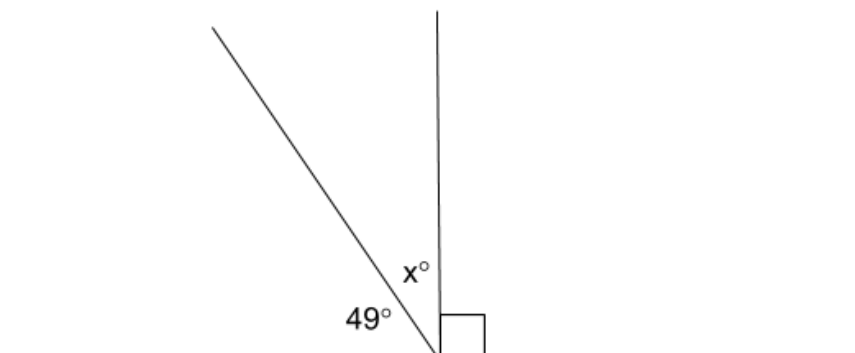
$x^\circ =$ _____

5. Look below at the straight line. What is the size of angle x ? Write your answer in the space below.



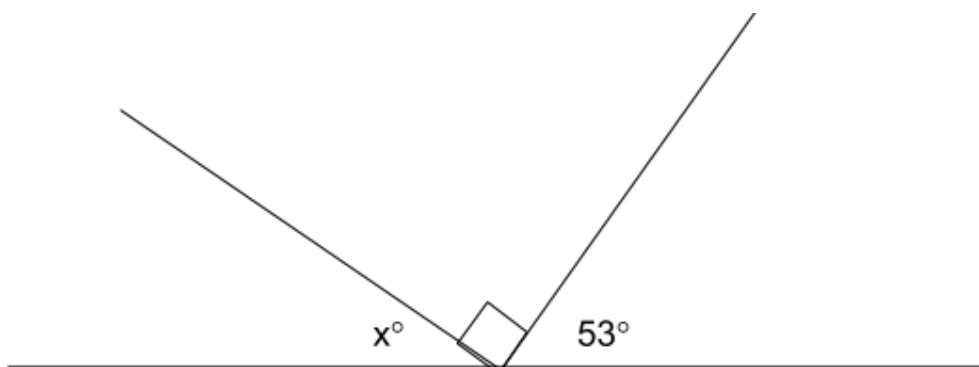
$x^\circ =$ _____

6. Look below at the straight line. What is the size of angle x ? Write your answer in the space below.



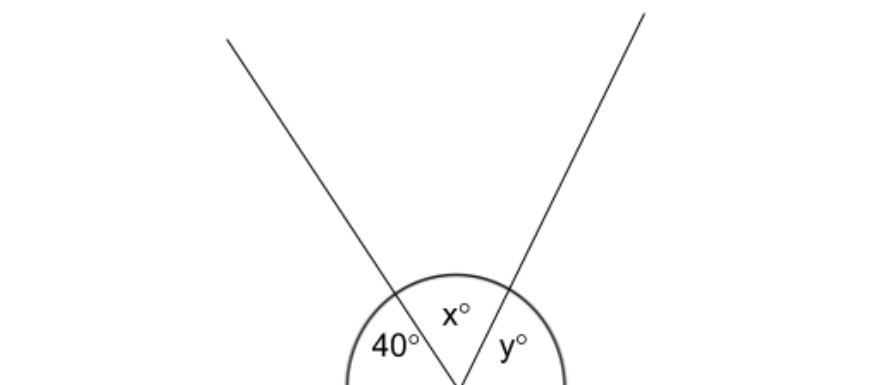
$x^\circ =$ _____

7. Look below at the straight line. What is the size of angle x ? Write your answer in the space below.



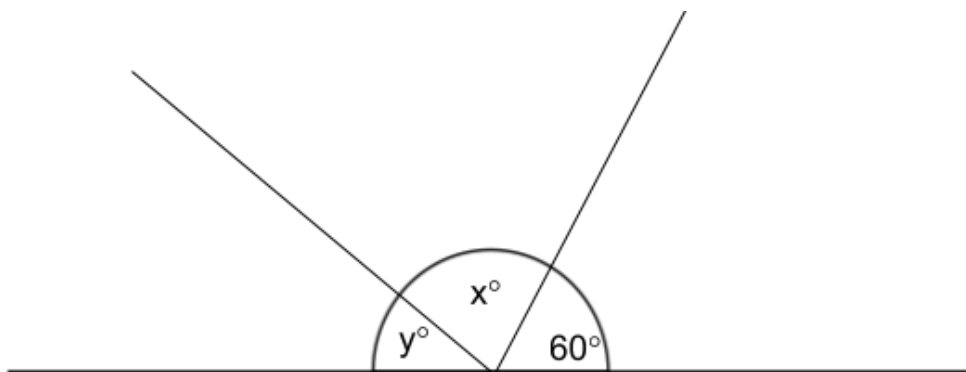
$x^\circ =$ _____

8. Look below at the straight line. Angle x and y are of equal size. What is the size of angle x ? Write your answer in the space below.



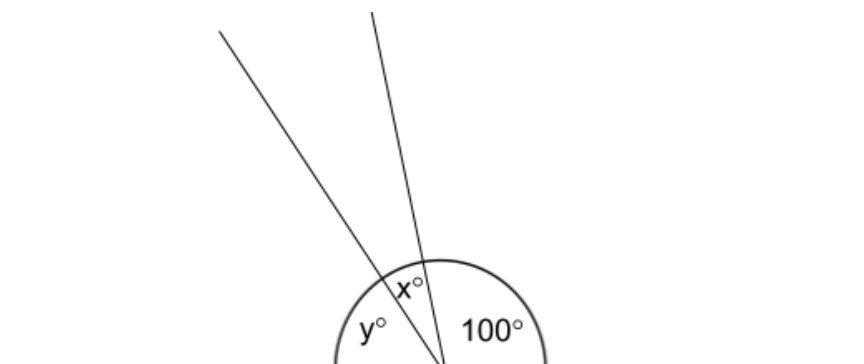
$x^\circ =$ _____

9. Look below at the straight line. Angle x is twice the size of angle y . What is the size of angle x ? Write your answer in the space below.



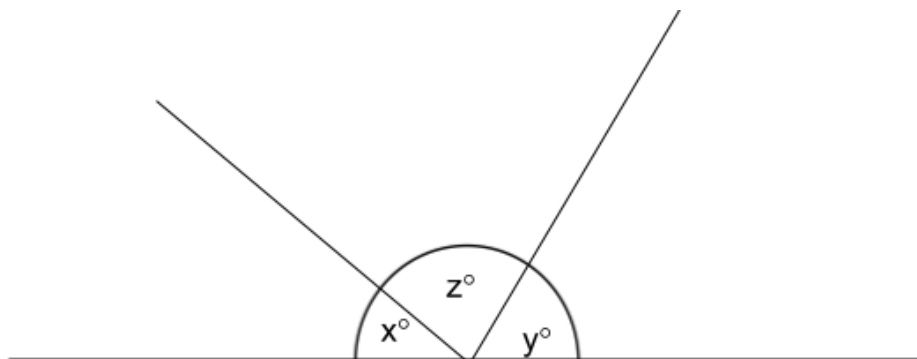
$X^\circ =$ _____

10. Look below at the straight line. Angle y is three times the size of angle x . What is the size of angle y ? Write your answer in the space below.



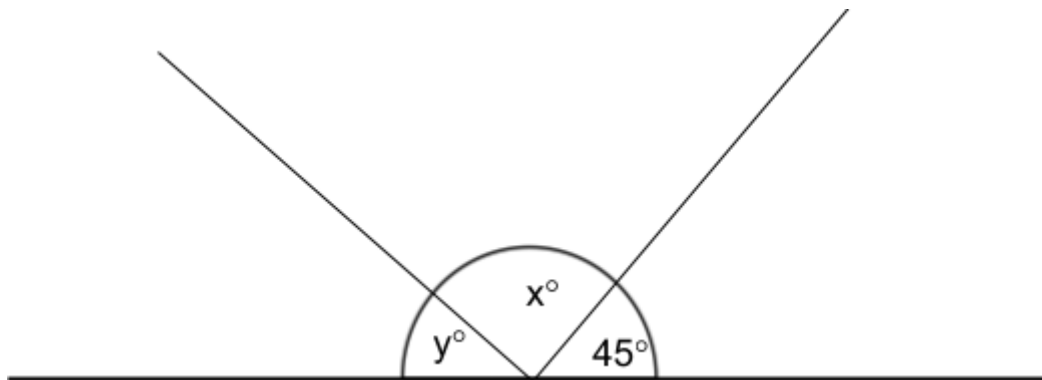
$Y^\circ =$ _____

11. Look below at the straight line. Angle z is three times the size of angle x and angle y is twice the size of angle x . What is the size of angle z ? Write your answer in the space below.



$Z^\circ =$ _____

12. Look below at the straight line. Angle x is four times the size of angle y . What is the size of angle x ? Write your answer in the space below.



$X^\circ =$ _____

Answers**1. 151****2. 43****3. 83****4. 24****5. 56****6. 41****7. 37****8. 70****9. 80****10.60****11.90****12.108**