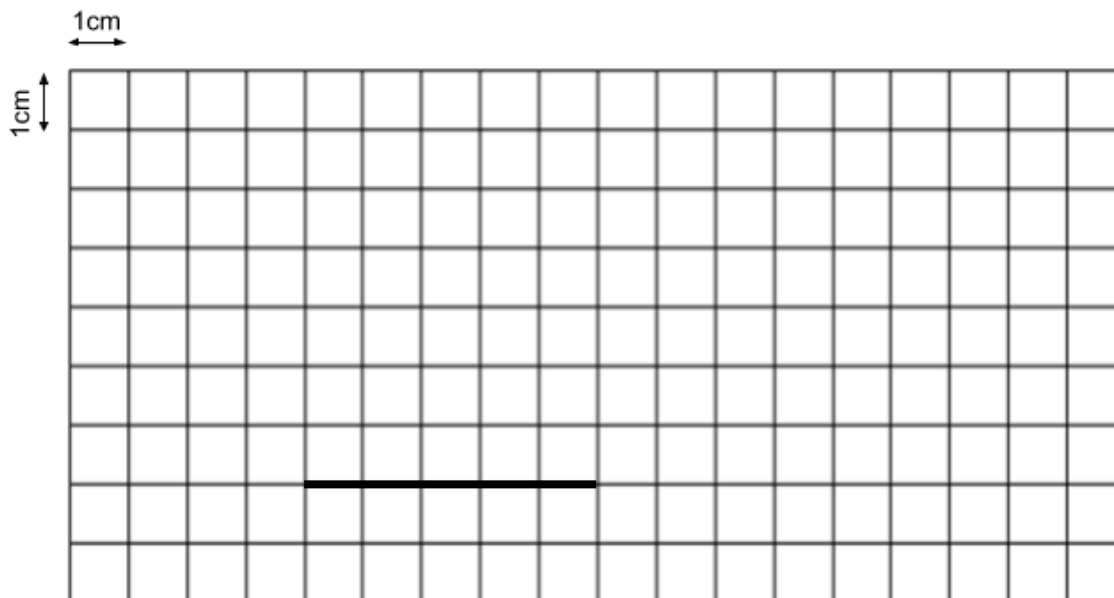
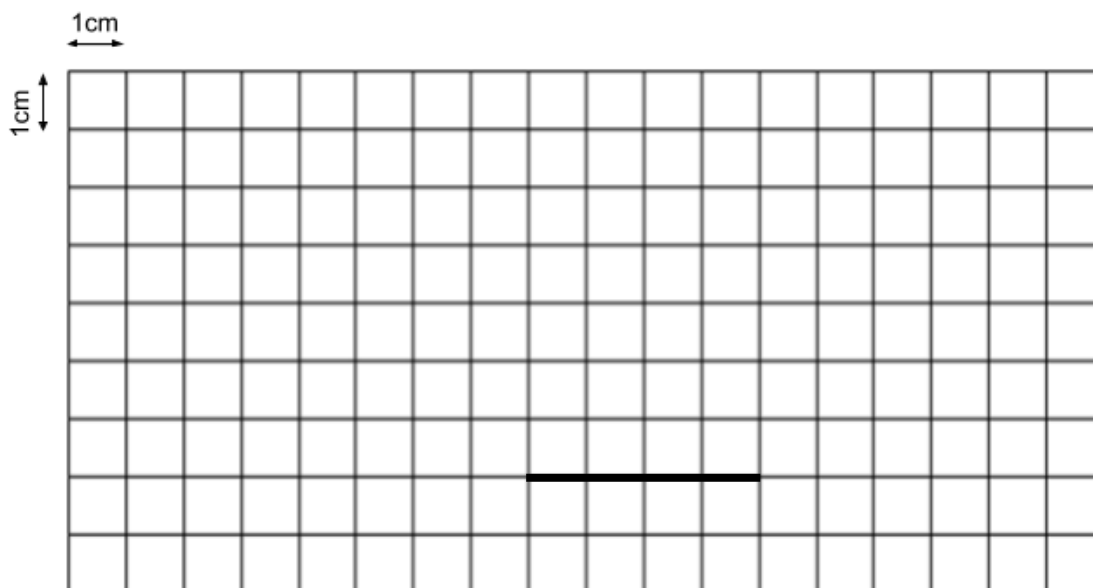


Q5 (Area) Day 65 Name: _____

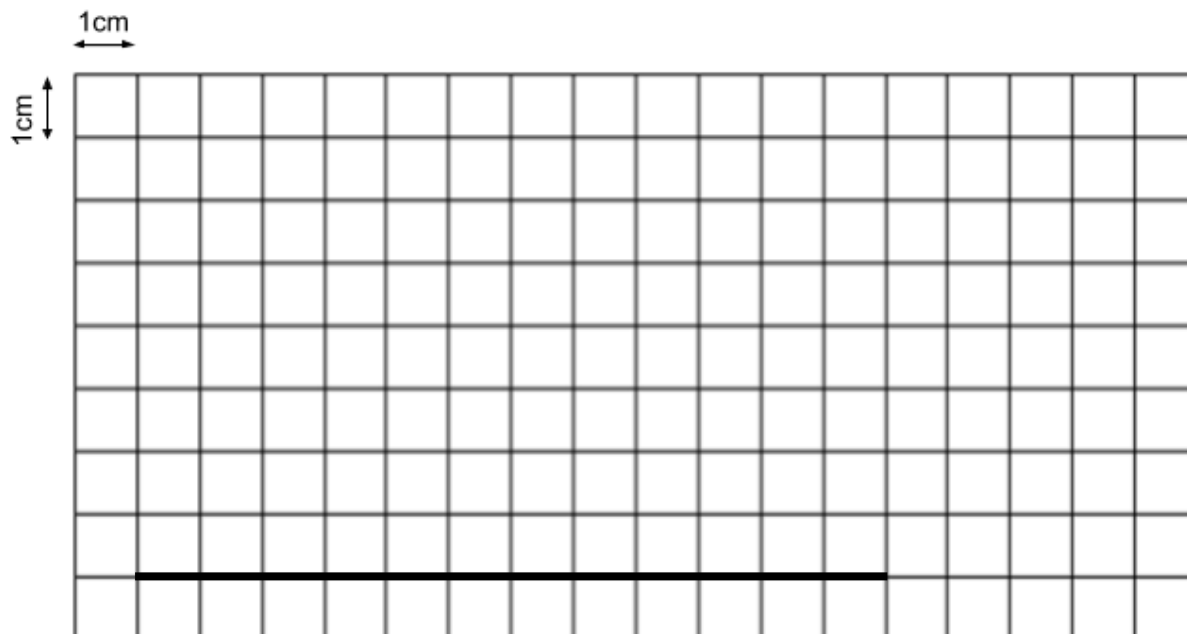
1. Look at the grid below. It is made up of small squares. The side of each small square is 1 cm long. A **line of length 5 cm** is drawn on the grid. This line is **one side** of a **rectangle of area 30 cm²**. Draw the other **three sides** of the rectangle in the grid. Draw your lines **clearly** and **accurately**.



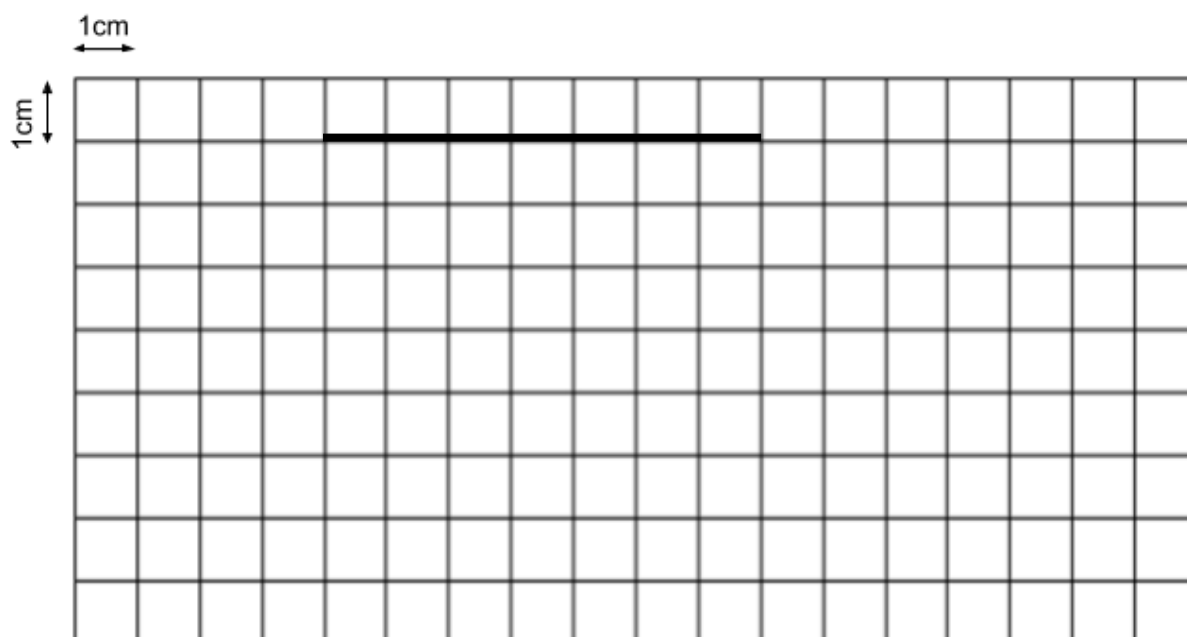
2. Look at the grid below. It is made up of small squares. The side of each small square is 1 cm long. A **line of length 4 cm** is drawn on the grid. This line is **one side** of a **rectangle of area 28 cm²**. Draw the other **three sides** of the rectangle in the grid. Draw your lines **clearly** and **accurately**.



3. Look at the grid below. It is made up of small squares. The side of each small square is 1 cm long. A **line of length 12 cm** is drawn on the grid. This line is **one side of a rectangle of area 48 cm²**. Draw the other **three sides** of the rectangle in the grid. Draw your lines **clearly** and **accurately**.




4. Look at the grid below. It is made up of small squares. The side of each small square is 1 cm long. A **line of length 7 cm** is drawn on the grid. This line is **one side of a rectangle of area 14 cm²**. Draw the other **three sides** of the rectangle in the grid. Draw your lines **clearly** and **accurately**.



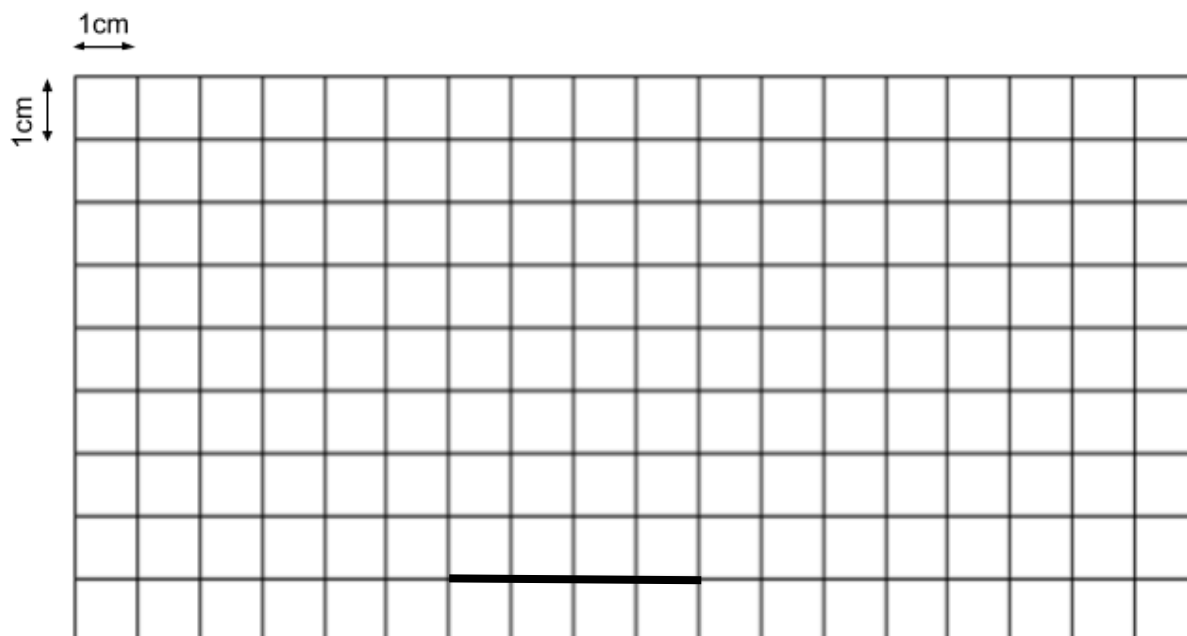
5. Look at the grid below. It is made up of small squares. The side of each small square is 1 cm long. A **line of length 8 cm** is drawn on the grid. This line is **one side** of a **rectangle of area 56 cm²**. Draw the other **three sides** of the rectangle in the grid. Draw your lines **clearly** and **accurately**.



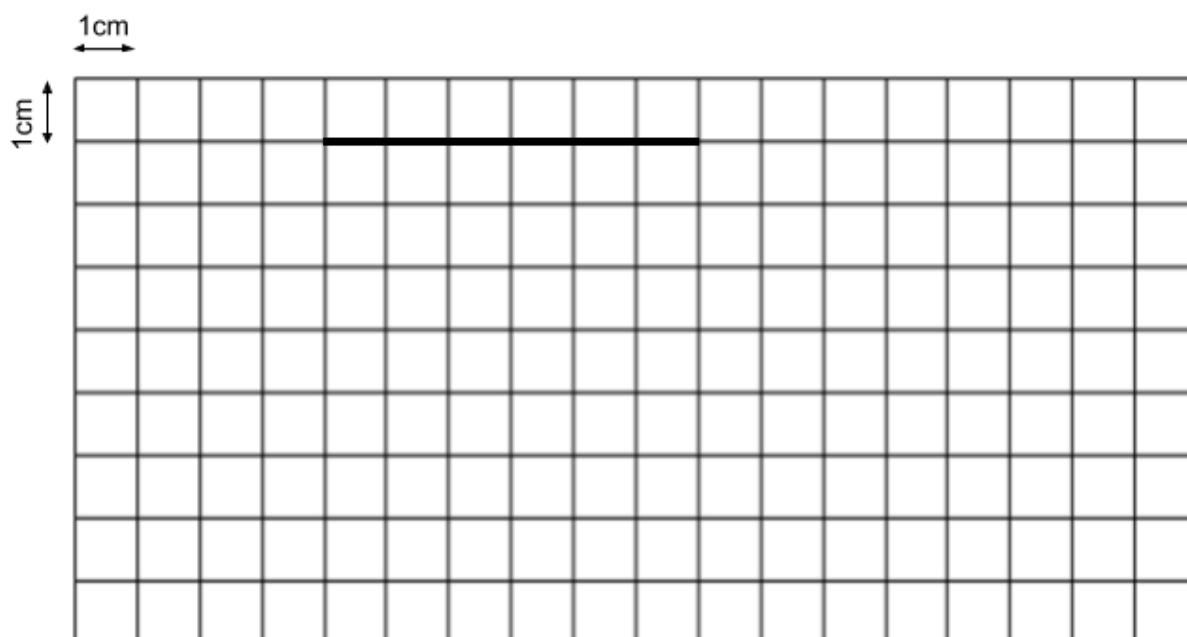
6. Look at the grid below. It is made up of small squares. The side of each small square is 1 cm long. A **line of length 6 cm** is drawn on the grid. This line is **one side** of a **rectangle of area 54 cm²**. Draw the other **three sides** of the rectangle in the grid. Draw your lines **clearly** and **accurately**.



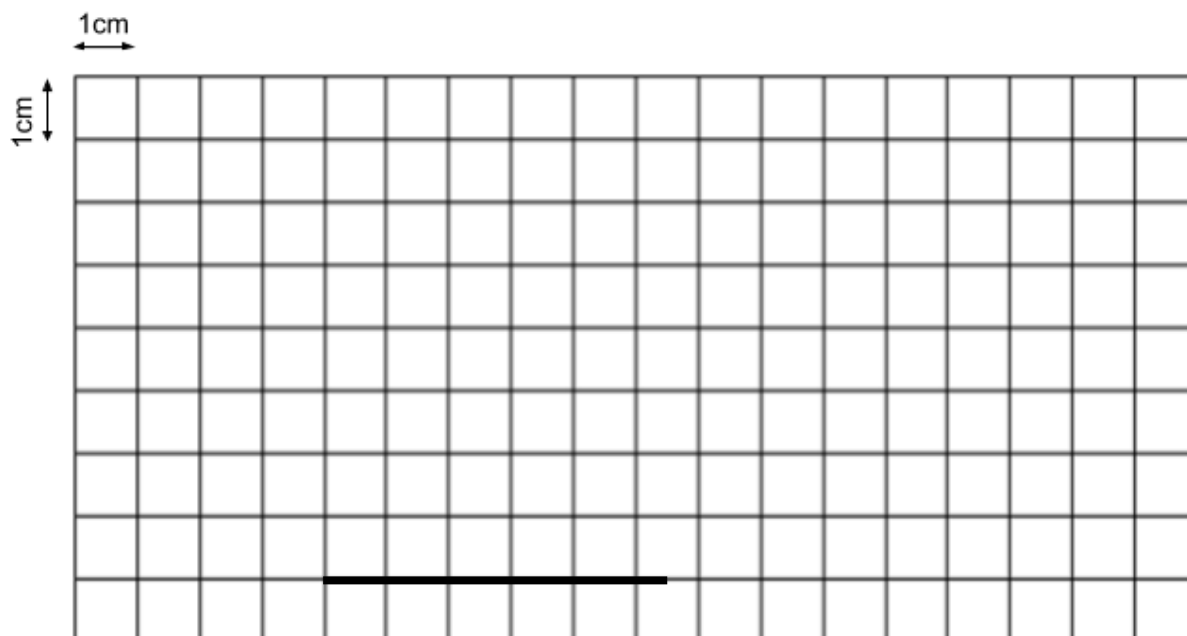
7. Look at the grid below. It is made up of small squares. The side of each small square is 1 cm long. A **line of length 4 cm** is drawn on the grid. This line is **one side** of a **rectangle of area 30 cm²**. Draw the other **three sides** of the rectangle in the grid. Draw your lines **clearly** and **accurately**.




8. Look at the grid below. It is made up of small squares. The side of each small square is 1 cm long. A **line of length 6 cm** is drawn on the grid. This line is **one side** of a **rectangle of area 39 cm²**. Draw the other **three sides** of the rectangle in the grid. Draw your lines **clearly** and **accurately**.



9. Look at the grid below. It is made up of small squares. The side of each small square is 1 cm long. A **line of length 5.5 cm** is drawn on the grid. This line is **one side of a rectangle of area 33 cm²**. Draw the other **three sides** of the rectangle in the grid. Draw your lines **clearly** and **accurately**.




10. Look at the grid below. It is made up of small squares. The side of each small square is 1 cm long. A **line of length 3.5 cm** is drawn on the grid. This line is **one side of a rectangle of area 28 cm²**. Draw the other **three sides** of the rectangle in the grid. Draw your lines **clearly** and **accurately**.



11. Look at the grid below. It is made up of small squares. The side of each small square is 1 cm long. A **line of length 9.5 cm** is drawn on the grid. This line **is one side** of a **rectangle of area 38 cm²**. Draw the other **three sides** of the rectangle in the grid. Draw your lines **clearly** and **accurately**.



12. Look at the grid below. It is made up of small squares. The side of each small square is 1 cm long. A **line of length 5.5 cm** is drawn on the grid. This line **is one side** of a **rectangle of area 41.25 cm²**. Draw the other **three sides** of the rectangle in the grid. Draw your lines **clearly** and **accurately**.



Answers

- 1.** A rectangle drawn with dimensions 5 by 6
- 2.** A rectangle drawn with dimensions 4 by 7
- 3.** A rectangle drawn with dimensions 12 by 4
- 4.** A rectangle drawn with dimensions 7 by 2
- 5.** A rectangle drawn with dimensions 8 by 7
- 6.** A rectangle drawn with dimensions 6 by 9
- 7.** A rectangle drawn with dimensions 4 by 7.5
- 8.** A rectangle drawn with dimensions 6 by 6.5
- 9.** A rectangle drawn with dimensions 5.5 by 6
- 10.** A rectangle drawn with dimensions 3.5 by 8
- 11.** A rectangle drawn with dimensions 9.5 by 4
- 12.** A rectangle drawn with dimensions 5.5 by 7.5