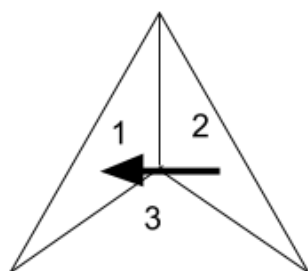
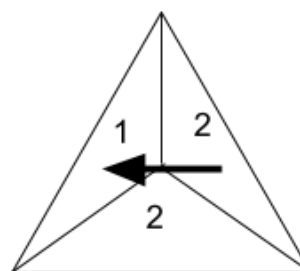


Q5 (Probability) Day 59 Name: _____

1. Look at the two spinners below (A and B). They are both equilateral triangles.



A



B

For each statement below tick **True** or **False**.

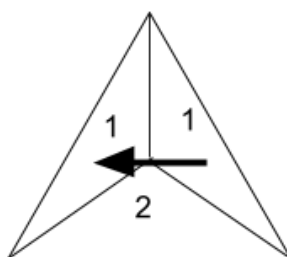
Scoring '1' is **more likely** on A than on B.

Scoring '2' is **less likely** on A than on B.

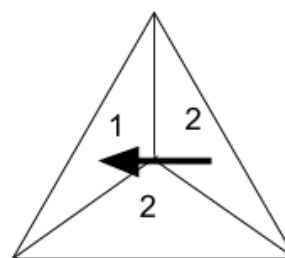
Scoring '3' is **more likely** on A than on B.

True	False

2. Look at the two spinners below (A and B). They are both equilateral triangles.



A



B

For each statement below tick **True** or **False**.

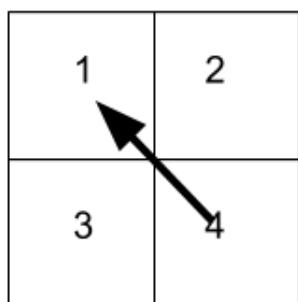
Scoring '1' is **more likely** on A than on B.

Scoring '2' is **more likely** on A than on B.

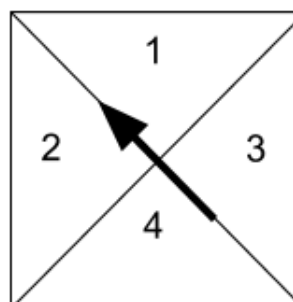
Scoring '1' is **equally likely** on A than on B.

True	False

3. Look at the two spinners below (A and B). They are both squares.



A



B

For each statement below tick **True** or **False**.

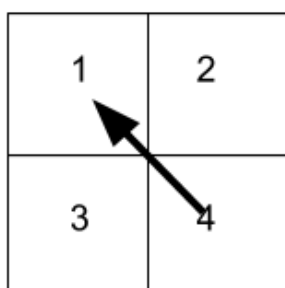
Scoring '2' is **less likely** on A than on B.

Scoring '4' is **more likely** on A than on B.

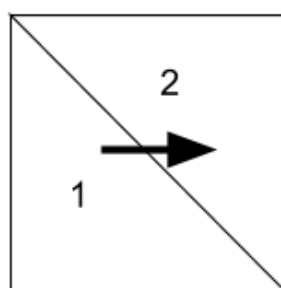
Scoring '3' is **equally likely** on A than on B.

True	False

4. Look at the two spinners below (A and B). They are both squares.



A



B

For each statement below tick **True** or **False**.

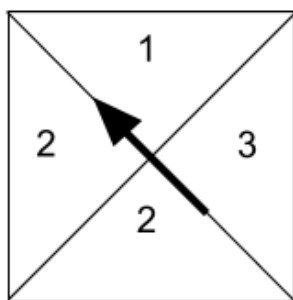
Scoring '3' is **more likely** on A than on B.

Scoring '4' is **less likely** on A than on B.

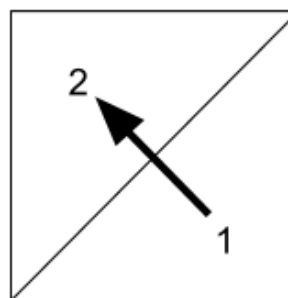
Scoring '1 or 2' is **equally likely** on A than on B.

True	False

5. Look at the two spinners below (A and B). They are both squares.



A



B

For each statement below tick **True** or **False**.

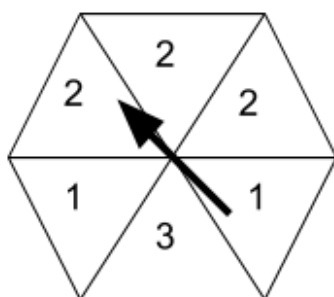
Scoring '1' is **less likely** on A than on B.

Scoring '2' is **equally likely** on A than on B.

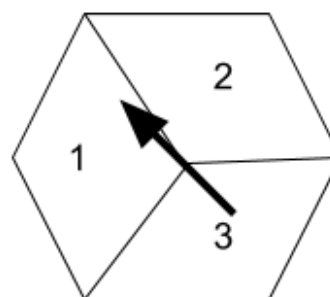
Scoring '3' is **equally likely** on A than on B.

True	False

6. Look at the two spinners below (A and B). They are both regular hexagons.



A



B

For each statement below tick **True** or **False**.

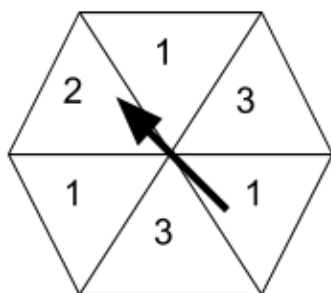
Scoring '1' is **more likely** on A than on B.

Scoring '2' is **more likely** on A than on B.

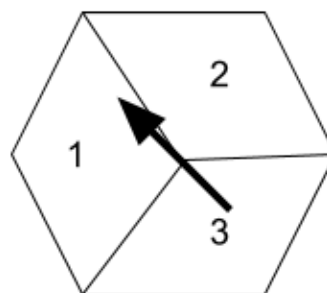
Scoring '3' is **equally likely** on A than on B.

True	False

7. Look at the two spinners below (A and B). They are both regular hexagons.



A



B

For each statement below tick **True** or **False**.

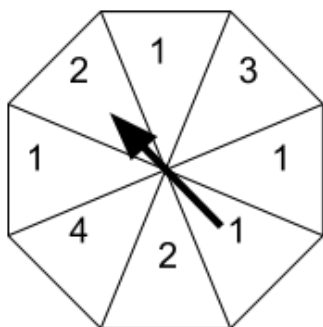
Scoring '1' is **more likely** on A than on B.

Scoring '2' is **more likely** on A than on B.

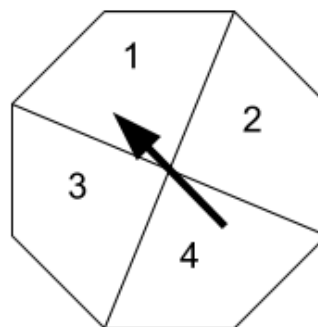
Scoring '3' is **equally likely** on A than on B.

True	False

8. Look at the two spinners below (A and B). They are both regular octagons.



A



B

For each statement below tick **True** or **False**.

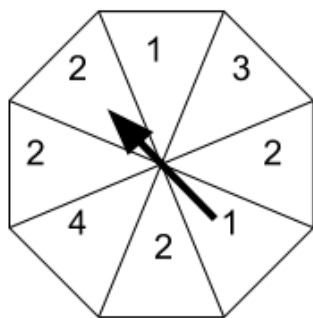
Scoring '1 or 2' is **equally likely** on A than on B.

Scoring '3 or 4' is **more likely** on A than on B.

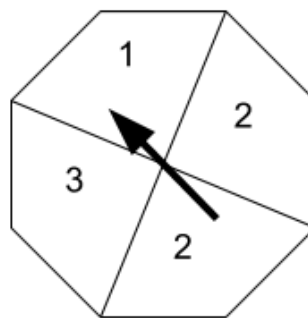
Scoring '2' is **equally likely** on A than on B.

True	False

9. Look at the two spinners below (A and B). They are both regular octagons.



A



B

For each statement below tick **True** or **False**.

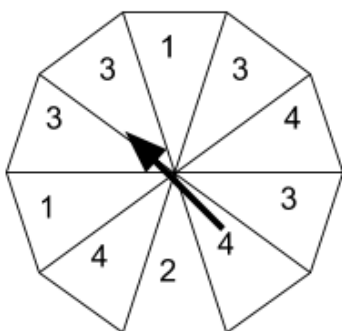
Scoring '1' is **more likely** on A than on B.

Scoring '2' is **equally likely** on A than on B.

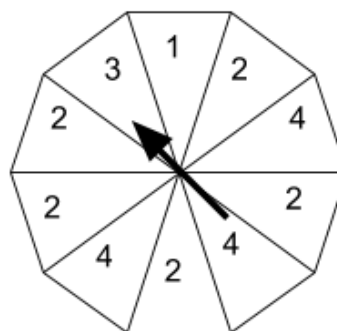
Scoring '3 or 4' is **equally likely** on A than on B.

True	False

10. Look at the two spinners below (A and B). They are both regular decagons.



A



B

For each statement below tick **True** or **False**.

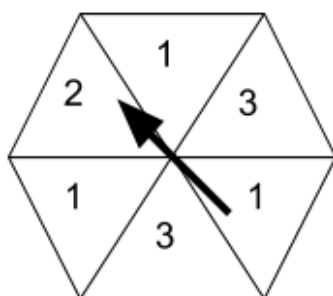
Scoring '1 or 3' is **more likely** on A than on B.

Scoring '2 or 4' is **more likely** on A than on B.

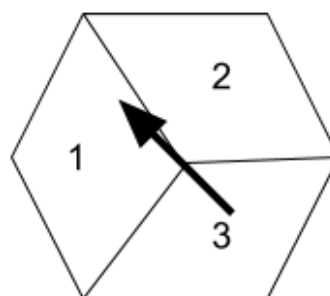
Scoring '4' is **equally likely** on A than on B.

True	False

11. Look at the two spinners below (A and B). They are both regular hexagons.



A



B

For each statement below tick **True** or **False**.

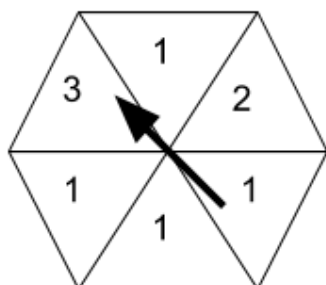
Scoring '3' is **more likely** on A than on B.

Scoring '2' is **less likely** on A than on B.

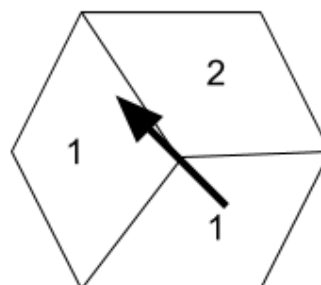
Scoring '2 or 3' is **equally likely** on A than on B.

True	False

12. Look at the two spinners below (A and B). They are both regular hexagons.



A



B

For each statement below tick **True** or **False**.

Scoring '1' is **less likely** on A than on B.

Scoring '3 or 2' is **more likely** on A than on B.

Scoring '1' is **equally likely** on A than on B.

True	False

Answers

1. **FTT**
2. **TFF**
3. **FFT**
4. **TFF**
5. **TTF**
6. **FTF**
7. **TFT**
8. **FFT**
9. **FTT**
10. **TFT**
11. **FTF**
12. **FFT**