


**Q5 (Area-Perimeter) Day 69**Name: \_\_\_\_\_

---

1. Look at the shape below. It is made up of a square and triangles.




The area of the shaded part of the square is  $8\text{cm}^2$ . What is the perimeter of the square? Write your answer in the space below.

\_\_\_\_\_ cm

---

2. Look at the shape below. It is made up of a square and triangles.




The area of the shaded part of the square is  $18\text{cm}^2$ . What is the perimeter of the square? Write your answer in the space below.

\_\_\_\_\_ cm

---

3. Look at the shape below. It is made up of a square and triangles.

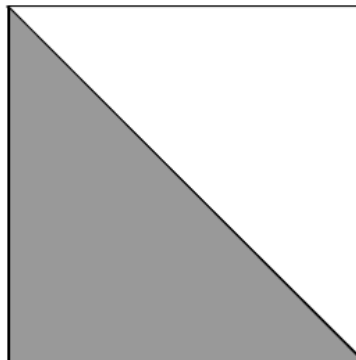


The area of the shaded part of the square is  $50\text{cm}^2$ . What is the perimeter of the square? Write your answer in the space below.

\_\_\_\_\_ cm

---

4. Look at the shape below. It is made up of a square and triangles.

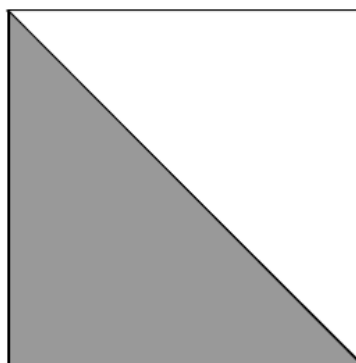


The area of the shaded part of the square is  $32\text{cm}^2$ . What is the perimeter of the square? Write your answer in the space below.

\_\_\_\_\_ cm

---

5. Look at the shape below. It is made up of a square and triangles.




The area of the shaded part of the square is  $72\text{cm}^2$ . What is the perimeter of the square? Write your answer in the space below.

\_\_\_\_\_ cm

---

6. Look at the shape below. It is made up of a square and triangles.

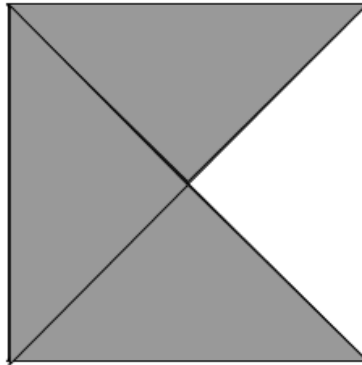


The area of the shaded part of the square is  $12\text{cm}^2$ . What is the perimeter of the square? Write your answer in the space below.

\_\_\_\_\_ cm

---

7. Look at the shape below. It is made up of a square and triangles.

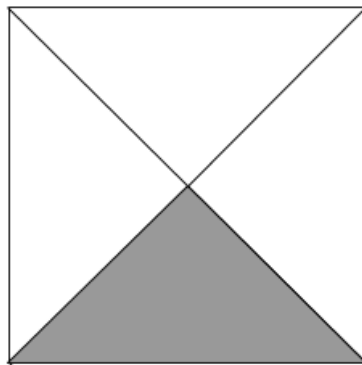


The area of the shaded part of the square is  $48\text{cm}^2$ . What is the perimeter of the square? Write your answer in the space below.

\_\_\_\_\_ cm

---

8. Look at the shape below. It is made up of a square and triangles.

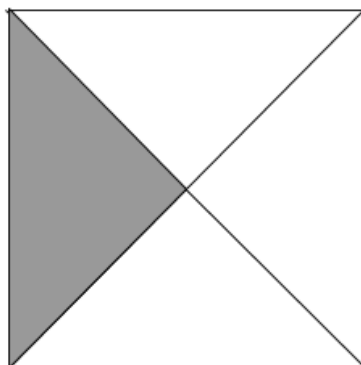


The area of the shaded part of the square is  $25\text{cm}^2$ . What is the perimeter of the square? Write your answer in the space below.

\_\_\_\_\_ cm

---

9. Look at the shape below. It is made up of a square and triangles.




The area of the shaded part of the square is  $36\text{cm}^2$ . What is the perimeter of the square? Write your answer in the space below.

\_\_\_\_\_ cm

---

10. Look at the shape below. It is made up of a square and triangles.

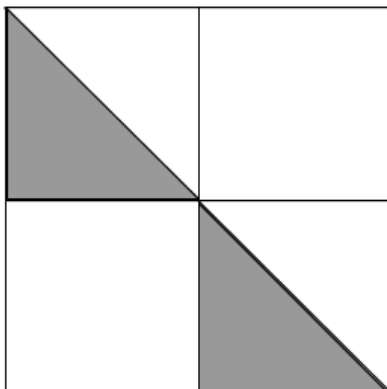


The area of the shaded part of the square is  $36.75\text{cm}^2$ . What is the perimeter of the square? Write your answer in the space below.

\_\_\_\_\_ cm

---

11. Look at the shape below. It is made up of a square and triangles.

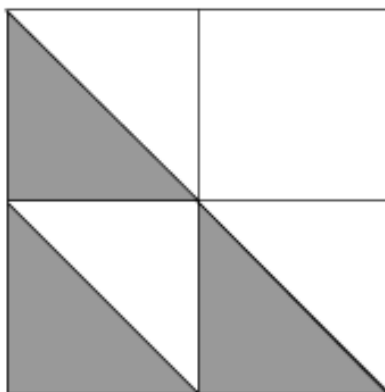


The area of the shaded part of the square is  $20.25\text{cm}^2$ . What is the perimeter of the square? Write your answer in the space below.

\_\_\_\_\_ cm

---

12. Look at the shape below. It is made up of a square and triangles.



The area of the shaded part of the square is  $13.5\text{cm}^2$ . What is the perimeter of the square? Write your answer in the space below.

\_\_\_\_\_ cm

---



**Answers**

- 1. 16**
- 2. 24**
- 3. 40**
- 4. 32**
- 5. 48**
- 6. 16**
- 7. 32**
- 8. 40**
- 9. 48**
- 10.28**
- 11.36**
- 12.24**