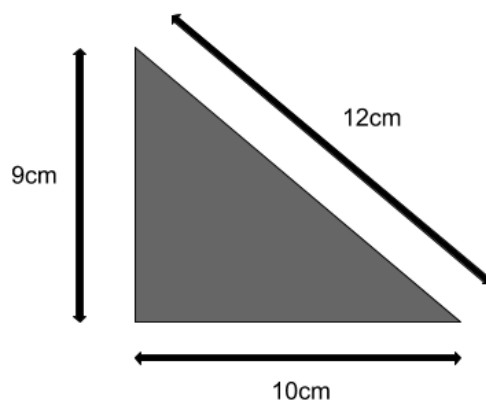


Q4 (Area/Perimeter of Triangle) Day 68 Name: _____

1. Look at the triangle below.



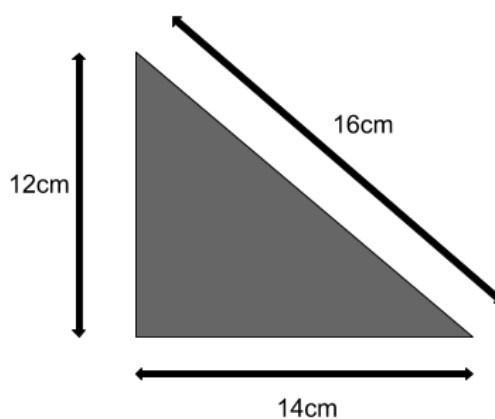
Find the **perimeter** of the triangle. Write your answer in the space below.

_____ cm

Find the **area** of the triangle. Write your answer in the space below.

_____ cm²

2. Look at the triangle below.



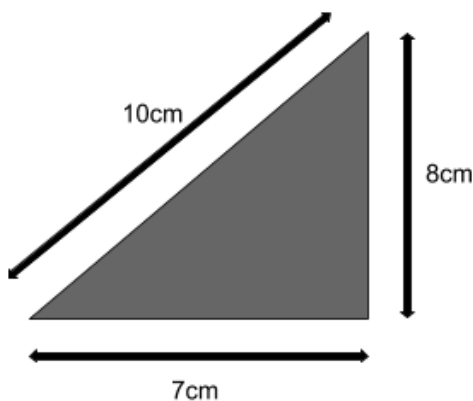
Find the **perimeter** of the triangle. Write your answer in the space below.

_____ cm

Find the **area** of the triangle. Write your answer in the space below.

_____ cm²

3. Look at the triangle below.



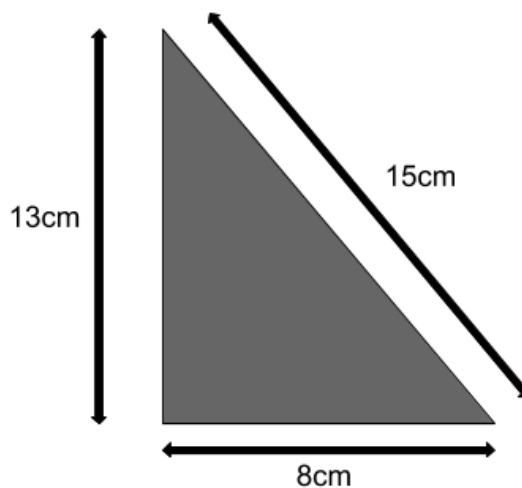
Find the **perimeter** of the triangle. Write your answer in the space below.

_____ cm

Find the **area** of the triangle. Write your answer in the space below.

_____ cm²

4. Look at the triangle below.



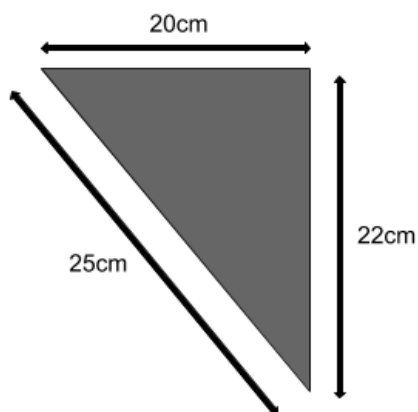
Find the **perimeter** of the triangle. Write your answer in the space below.

_____ cm

Find the **area** of the triangle. Write your answer in the space below.

_____ cm²

5. Look at the triangle below.



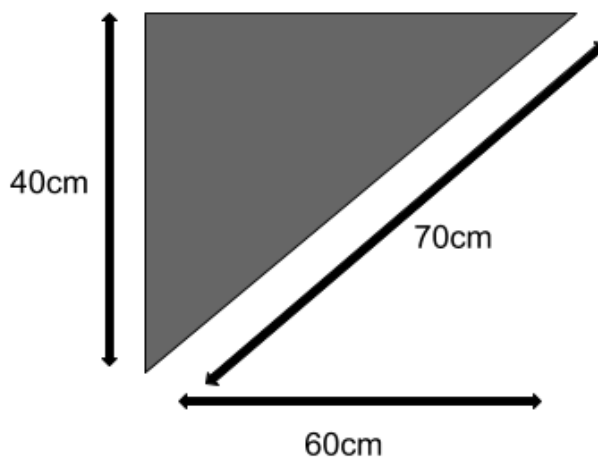
Find the **perimeter** of the triangle. Write your answer in the space below.

_____ cm

Find the **area** of the triangle. Write your answer in the space below.

_____ cm²

6. Look at the triangle below.



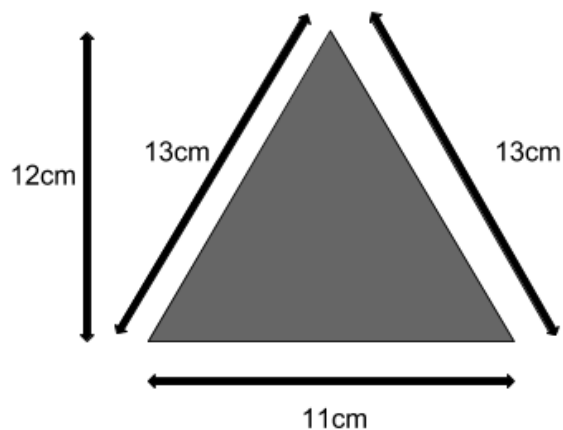
Find the **perimeter** of the triangle. Write your answer in the space below.

_____ cm

Find the **area** of the triangle. Write your answer in the space below.

_____ cm²

7. Look at the triangle below.



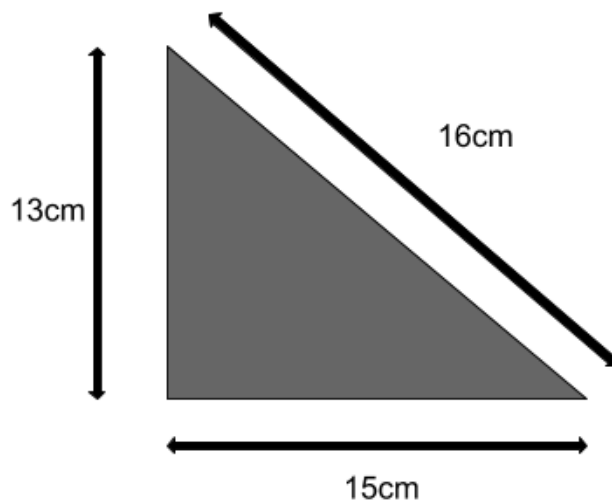
Find the **perimeter** of the triangle. Write your answer in the space below.

_____ cm

Find the **area** of the triangle. Write your answer in the space below.

_____ cm²

8. Look at the triangle below.



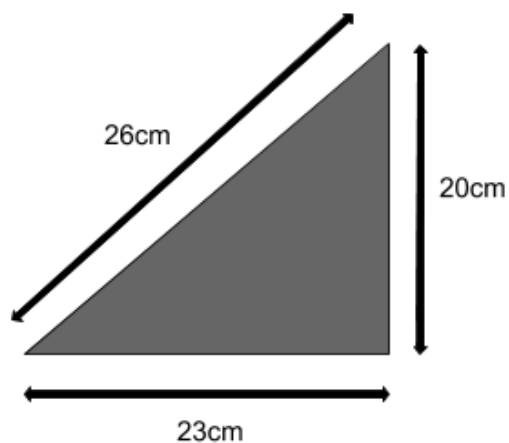
Find the **perimeter** of the triangle. Write your answer in the space below.

_____ cm

Find the **area** of the triangle. Write your answer in the space below.

_____ cm²

9. Look at the triangle below.



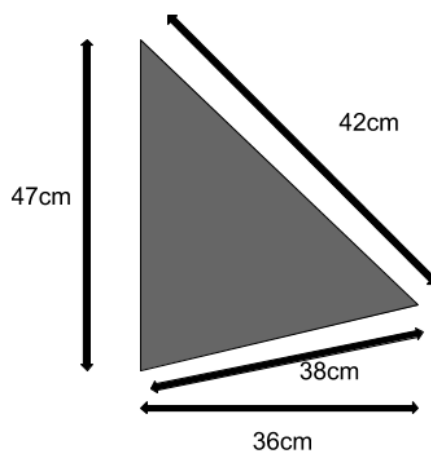
Find the **perimeter** of the triangle. Write your answer in the space below.

_____ cm

Find the **area** of the triangle. Write your answer in the space below.

_____ cm²

10. Look at the triangle below.



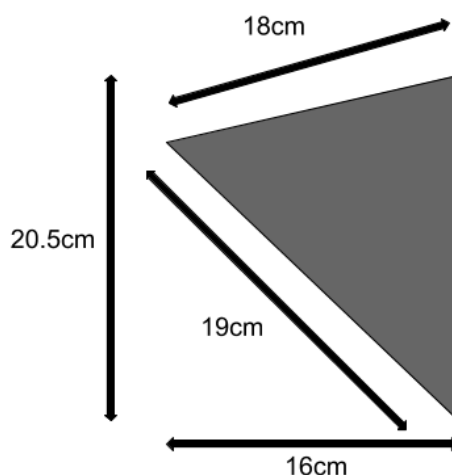
Find the **perimeter** of the triangle. Write your answer in the space below.

_____ cm

Find the **area** of the triangle. Write your answer in the space below.

_____ cm²

11. Look at the triangle below.



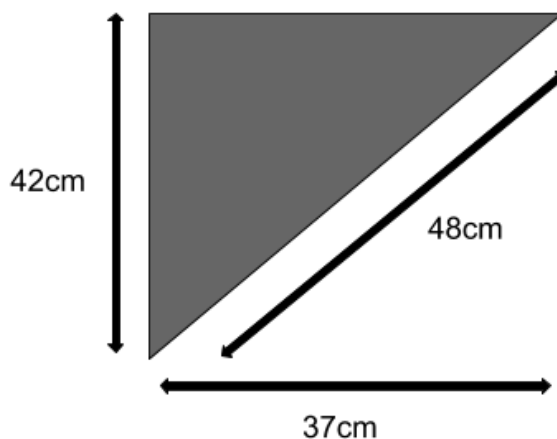
Find the **perimeter** of the triangle. Write your answer in the space below.

_____ cm

Find the **area** of the triangle. Write your answer in the space below.

_____ cm²

12. Look at the triangle below.



Find the **perimeter** of the triangle. Write your answer in the space below.

_____ cm

Find the **area** of the triangle. Write your answer in the space below.

_____ cm²

Answers

1. 31	45
2. 42	84
3. 25	28
4. 36	52
5. 67	220
6. 170	1200
7. 37	66
8. 44	97.5
9. 69	230
10.127	846
11.57.5	164
12.127	777