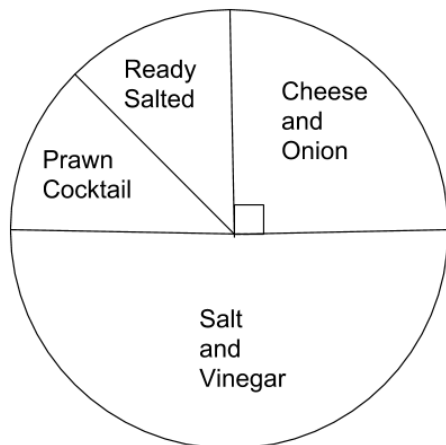


**Q4 (Pie Chart) Day 67 Name:** \_\_\_\_\_

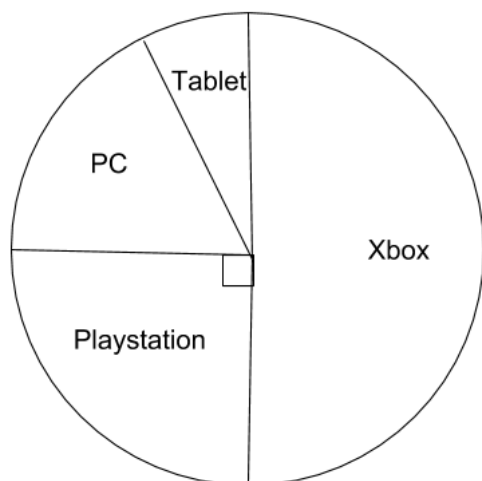
1. The pie chart below shows **20 children's** favourite crisp flavour.



The number of children who like **Prawn Cocktail is 3**. **How many** children like **Ready Salted**? Write your answer in the space below.

\_\_\_\_\_ children

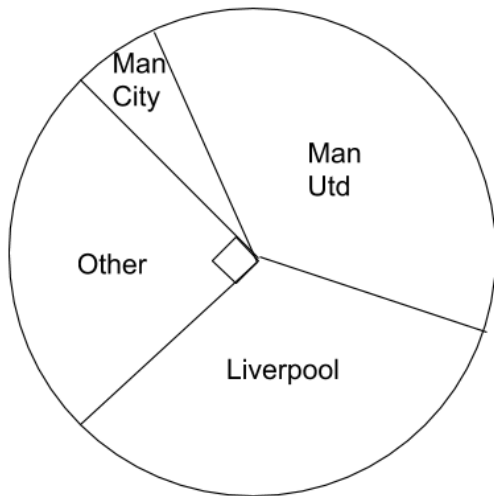
2. The pie chart below shows **40 children's** favourite games console.



The number of children who like a **Tablet is 3**. **How many** children like **PC**? Write your answer in the space below.

\_\_\_\_\_ adults

3. The pie chart below shows **60 children's** favourite football team.

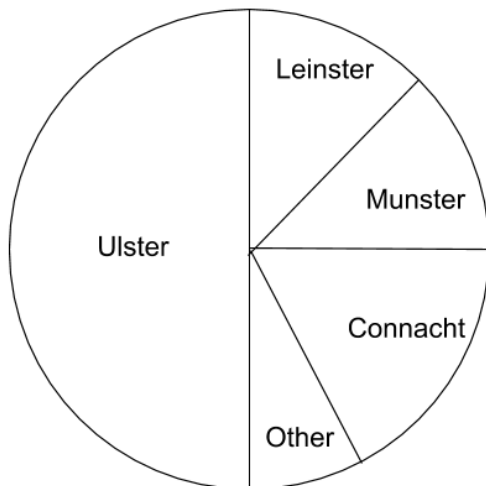


The number of children who like **Man City** is **5**. The **same** number of children like both **Man UTD** and **Liverpool**. **How many** children like **Liverpool**? Write your answer in the space below.

\_\_\_\_\_ children

---

4. The pie chart below shows **70 adult's** favourite rugby team.

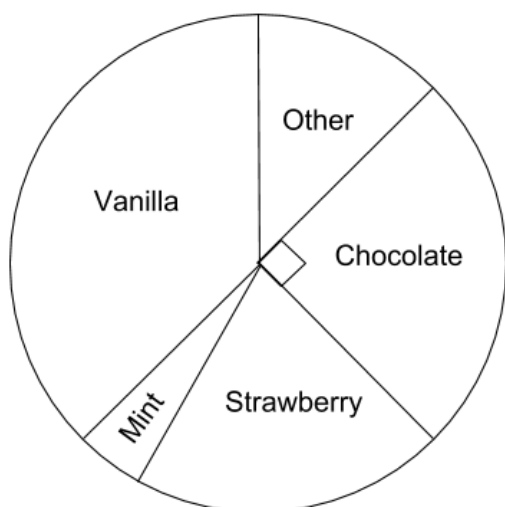


The number of adults who like **Munster** is **8**. The number of adults who like **Leinster** is **9**. The number of adults who like **Connacht** is **3 more than Munster**. **How many** adults like **other**? Write your answer in the space below.

\_\_\_\_\_ adults

---

5. The pie chart below shows **80 adult's** favourite ice cream flavour.

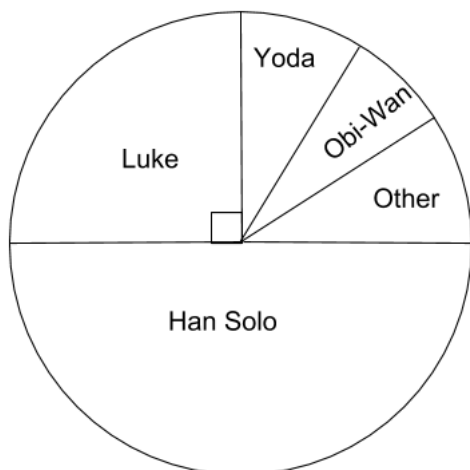


The number of adults who like **Vanilla** is **30**. The number of adults who like **Strawberry** is **18**. The number of adults who like **other** is **9 less than Strawberry**. **How many** adults like **mint**? Write your answer in the space below.

\_\_\_\_\_ adults

---

6. The pie chart below shows **100 children's** favourite Star Wars character.

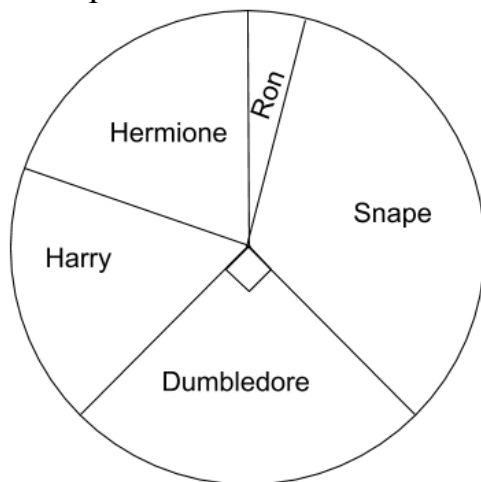


The number of children who like **Obi-Wan** is **7**. The number of children that like **Yoda and Other** is **the same**. **How many** children like **Yoda**? Write your answer in the space below.

\_\_\_\_\_ children

---

7. The pie chart below shows **120 children's** favourite Harry Potter character.

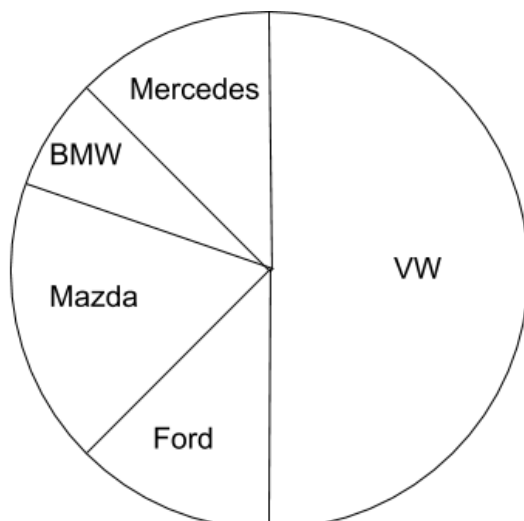


The number of adults who like **Snape** is **45**. The number of adults who like **Hermione and Harry** is **the same**. The number of adults who like **Ron** is  $\frac{1}{4}$  of the adults who like **Harry**. The number of adults who like **Hermione** is **20**. **How many** adults like **Ron**? Write your answer in the space below.

\_\_\_\_\_ adults

---

8. The pie chart below shows **130 adult's** favourite make of car.

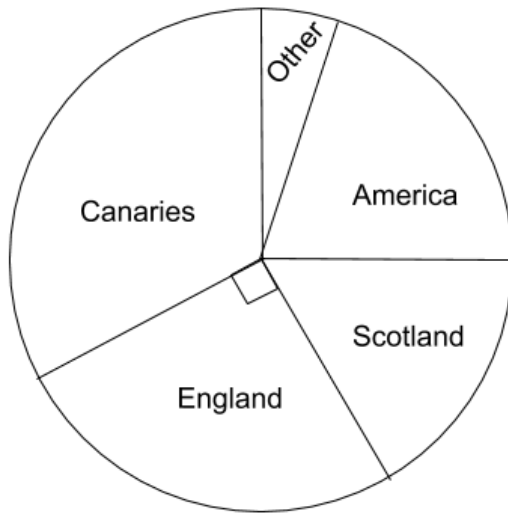


The number of adults who like **Mazda** is **20**. The number of adults who like **Mercedes and Ford** is **the same**. The number of adults who like **BMW** is **9**. **How many** adults like **Ford**? Write your answer in the space below.

\_\_\_\_\_ adults

---

9. The pie chart below shows **140 children's** favourite holiday destination.

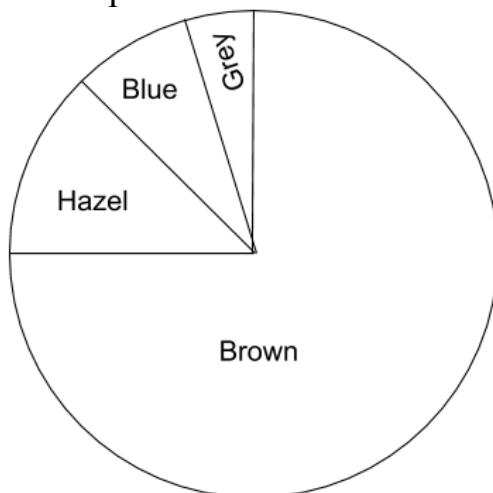


The number of children who like **America is 30**. The number of children that like **Scotland is 28**. The number of children who like **Canaries is 5 more than England**. **How many children like other?** Write your answer in the space below.

\_\_\_\_\_ children

---

10. The pie chart below shows **160 adult's** favourite colour.

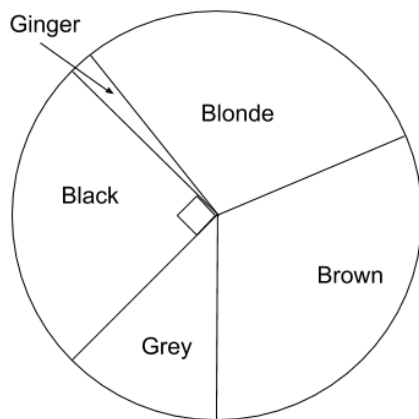


The number of adults who like **Hazel is one sixth of the amount that like Brown**. The number of adults who like **Blue is 17**. **How many adults like Grey?** Write your answer in the space below.

\_\_\_\_\_ adults

---

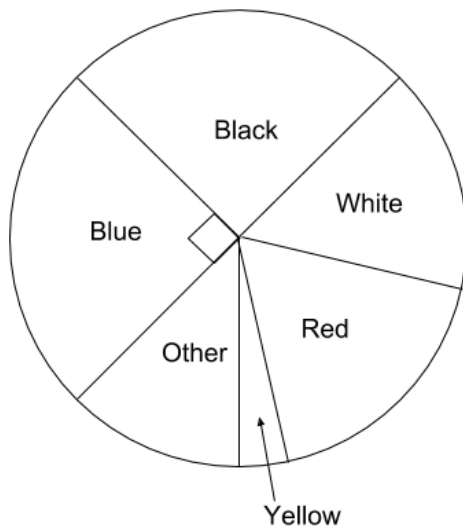
11. The pie chart below shows **180 adult's** favourite colour.



The number of adults who like **Blonde is 5 more than Black**. The number of adults who like **Brown is 5 more than Blonde**. The number of adults who like **Grey is 27**. **How many** adults like **Ginger**? Write your answer in the space below.

\_\_\_\_\_ adults

12. The pie chart below shows **200 children's** favourite colour.



The number of children who like **Black is the same as Blue**. The number of children that like **Other is 25**. The number of children who like **White is 5 more than other**. The number of children who like **Red is 5 more than White**. **How many** children like **Yellow**? Write your answer in the space below.

\_\_\_\_\_ children

**Answers****1. 2****2. 7****3. 20****4. 7****5. 3****6. 9****7. 5****8. 18****9. 7****10.3****11.3****12.10**