

**Q5 (Bar Chart) Day 70**      **Name:** \_\_\_\_\_

1. Sam records the **number exercises** he **completes each day** for a week. He draws the graph below.



a) On which **day** did he complete the **most number of exercises**? Write your answer in the space below.

\_\_\_\_\_

b) On which **day** did he complete the **fewest number of exercises**? Write your answer in the space below.

\_\_\_\_\_

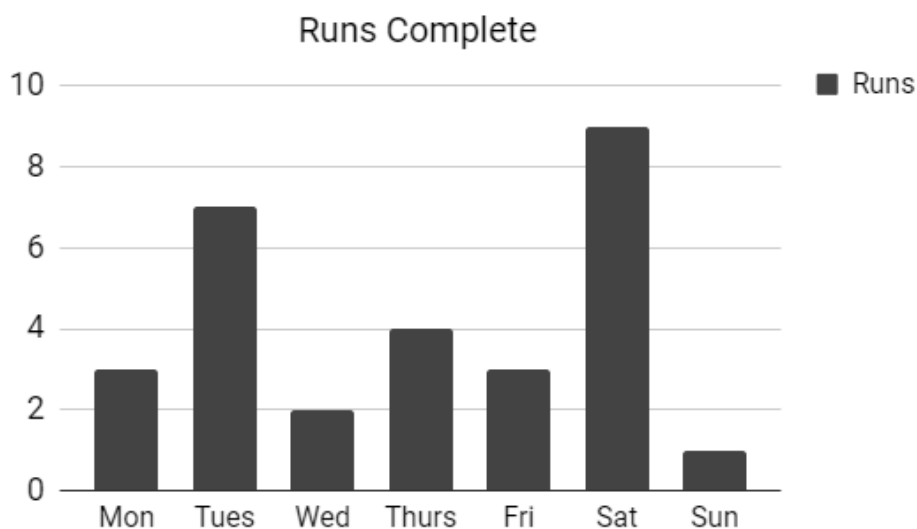
c) Which **day** had **more** exercises than **Friday**, but **fewer** exercises than **Wednesday**? Write your answer in the space below.

\_\_\_\_\_

d) **How many** exercises did John complete **in total** over the week? Write your answer in the space below.

\_\_\_\_\_

2. Ruth records the **number runs** she **completes each day** for a week. She draws the graph below.



a) On which **day** did she complete the **fewest number of runs**? Write your answer in the space below.

---

b) On which **day** did she complete the **most number of runs**? Write your answer in the space below.

---

c) Which **day** had **more** runs than **Monday**, but **fewer** runs than **Tuesday**? Write your answer in the space below.

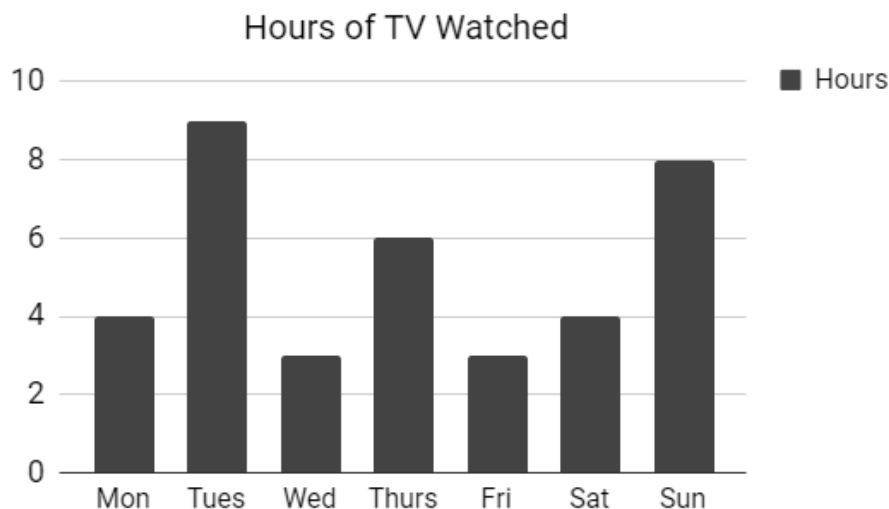
---

d) **How many** runs did Ruth complete **in total** over the week? Write your answer in the space below.

---

---

3. John records the **number of hours of TV he watches each day** for a week. He draws the graph below.



a) On which **day** did he watch the **most hours of TV**? Write your answer in the space below.

\_\_\_\_\_

b) On which **days** did he watch the **fewest hours of TV**? Write your answers in the spaces below.

\_\_\_\_\_ and \_\_\_\_\_

c) Which **day** had **more** hours watched than **Thursday**, but **fewer** hours watched than **Tuesday**? Write your answer in the space below.

\_\_\_\_\_

d) **How many** hours did John watch **in total** over the week? Write your answer in the space below.

\_\_\_\_\_

\_\_\_\_\_

4. Grace records the **number of coffees** she **drinks each day** for a week. She draws the graph below.



a) On which **day** did she drink the **fewest cups of coffee**? Write your answer in the space below.

---

b) On which **day** did she drink the **most cups of coffee**? Write your answer in the space below.

---

c) Which **day** had **more** coffees consumed than **Friday**, but **fewer** coffees consumed than **Tuesday**? Write your answer in the space below.

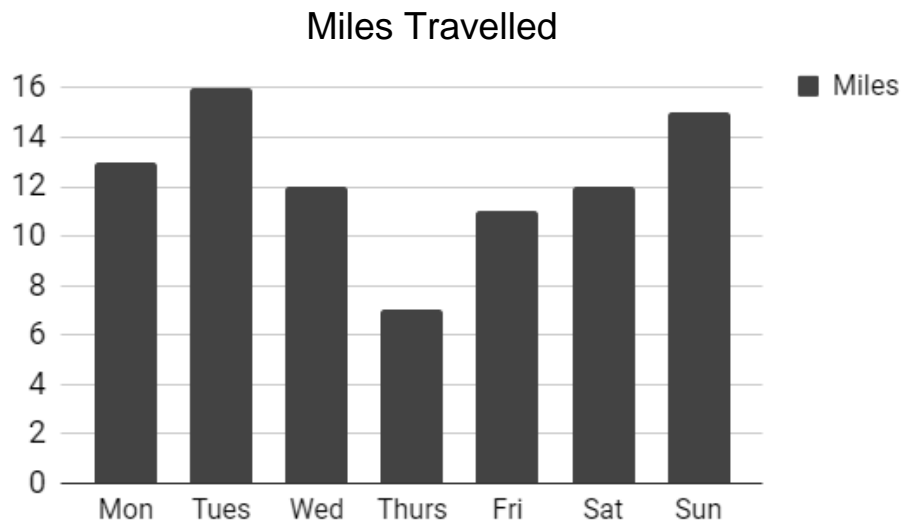
---

d) **How many** coffees did Grace drink **in total** over the week? Write your answer in the space below.

---

---

5. Derek records the **number of miles** he **travels each day** for a week. He draws the graph below.



a) On which **day** did he travel the **2<sup>nd</sup> most number of miles**? Write your answer in the space below.

---

b) On which **day** did he travel the **2<sup>nd</sup> fewest number of miles**? Write your answer in the space below.

---

c) Which **day** had **more** miles than **Saturday**, but **fewer** miles than **Sunday**? Write your answer in the space below.

---

d) **How many** miles did Derek travel **in total** over the week? Write your answer in the space below.

---

---

6. Clare records the **number of books** she **reads each day** for a week. She draws the graph below.



a) On which **day** did she read the **2<sup>nd</sup> fewest number of books**? Write your answer in the space below.

---

b) On which **day** did she read the **2<sup>nd</sup> most number of books**? Write your answer in the space below.

---

c) Which **day** had **more** books than **Tuesday**, but **fewer** books than **Wednesday**? Write your answer in the space below.

---

d) **How many** books did Clare read **in total** over the week? Write your answer in the space below.

---

---

7. Max records the **number of golf shots** he **takes each day** for a week. He draws the graph below.



a) On which **day** did he complete the **2<sup>nd</sup> most number of golf shots**? Write your answer in the space below.

---

b) On which **day** did he complete the **fewest number of golf shots**? Write your answer in the space below.

---

c) Which **day** had **more** golf shots than **Wednesday**, but **fewer** golf shots than **Friday**? Write your answer in the space below.

---

d) **How many** golf shots did Max complete **in total** over the week? Write your answer in the space below.

---

---

8. Gemma records the **number of hours** she **spends practicing her violin each day** for a week. She draws the graph below.



a) On which **days** did she practice the **3<sup>rd</sup> fewest number of hours**? Write your answers in the spaces below.

\_\_\_\_\_ and \_\_\_\_\_

b) On which **day** did she practice the **2<sup>nd</sup> most number of hours**? Write your answer in the space below.

\_\_\_\_\_

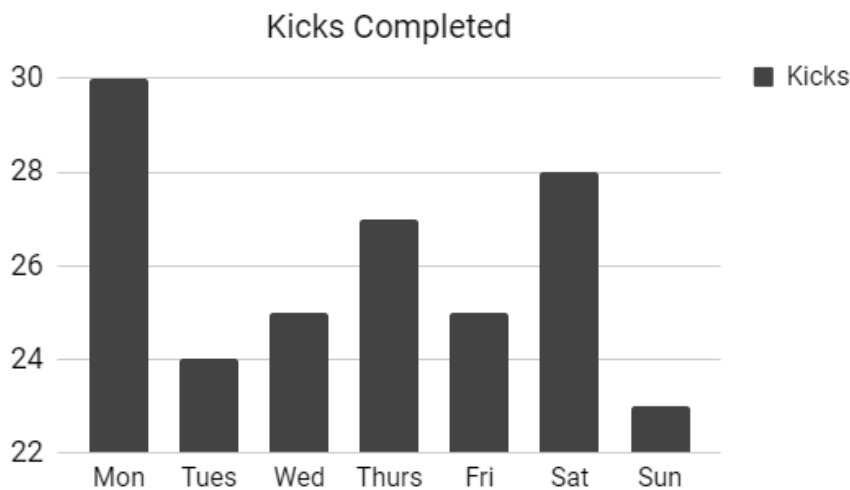
c) Which **day** had **more** practice hours than **Monday**, but **fewer** practice hours than **Tuesday**? Write your answer in the space below.

\_\_\_\_\_

d) **How many** hours practice did Gemma complete **in total** over the week? Write your answer in the space below.

\_\_\_\_\_

9. Toby records the **number of kicks** he **takes each day at rugby training** for a week. He draws the graph below.



a) On which **day** did he complete the **3<sup>rd</sup> most number of kicks at practice**?  
Write your answer in the space below.

\_\_\_\_\_

b) On which **days** did he complete the **3<sup>rd</sup> fewest number of kicks at practice**?  
Write your answers in the spaces below.

\_\_\_\_\_ and \_\_\_\_\_

c) Which **day** had **more** kicks than **Friday**, but **fewer** kicks than **Saturday**?  
Write your answer in the space below.

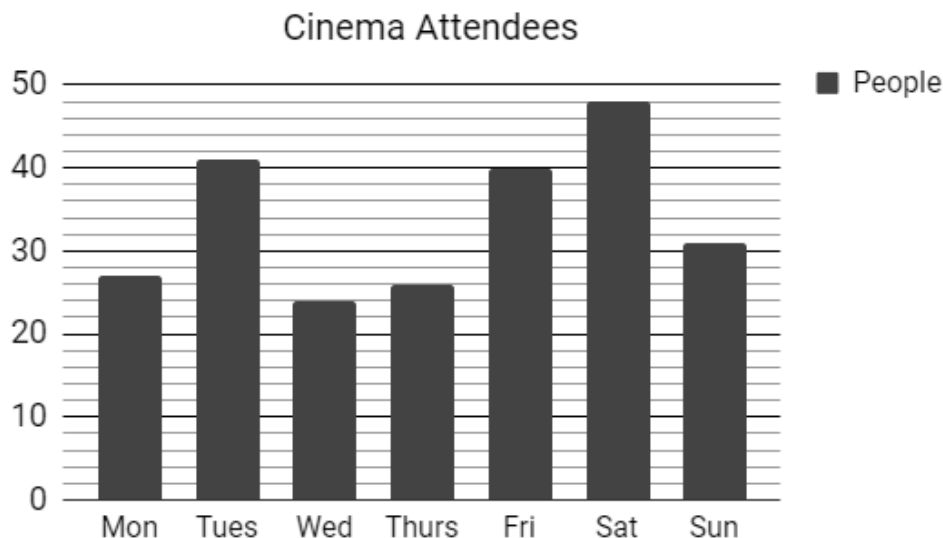
\_\_\_\_\_

d) **How many** kicks did Toby complete **in total** over the week? Write your answer in the space below.

\_\_\_\_\_

\_\_\_\_\_

10. Isla records the **number of customers** that attend the cinema **each day** for a week. She draws the graph below.



a) On which **day** was there the **3<sup>rd</sup> fewest number of people at the cinema?**  
Write your answer in the space below.

---

b) On which **day** was there the **3<sup>rd</sup> most number of people at the cinema?**  
Write your answer in the space below.

---

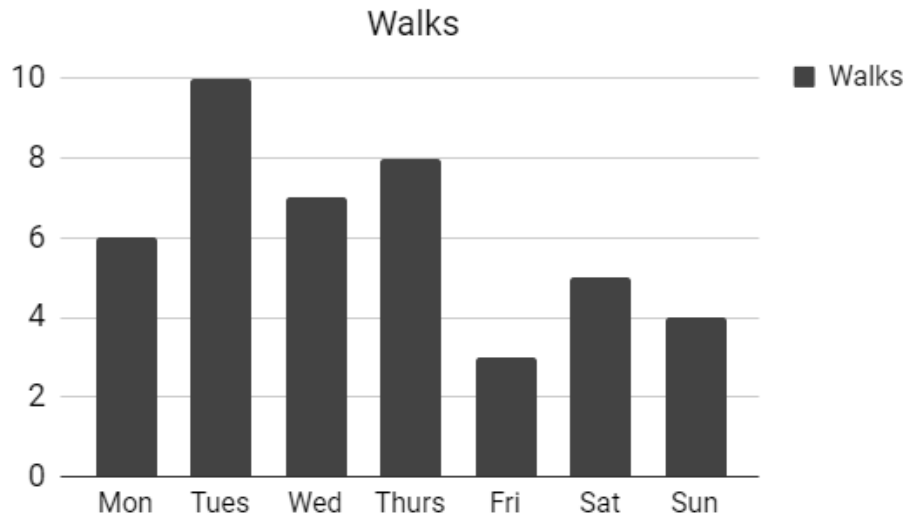
c) Which **day** had **more** people than **Wednesday**, but **fewer** people than **Monday**? Write your answer in the space below.

---

d) **How many** people attended the cinema **in total** over the week? Write your answer in the space below.

---

11. Barney records the **number of walks** he **completes each day** for a week. He draws the graph below.



a) On which **day** did he walk the **4<sup>th</sup> most number of walks**? Write your answer in the space below.

---

b) On which **day** did he walk the **4<sup>th</sup> fewest number of walks**? Write your answer in the space below.

---

c) Which **day** had **more** walks than **Monday**, but **fewer** walks than **Thursday**? Write your answer in the space below.

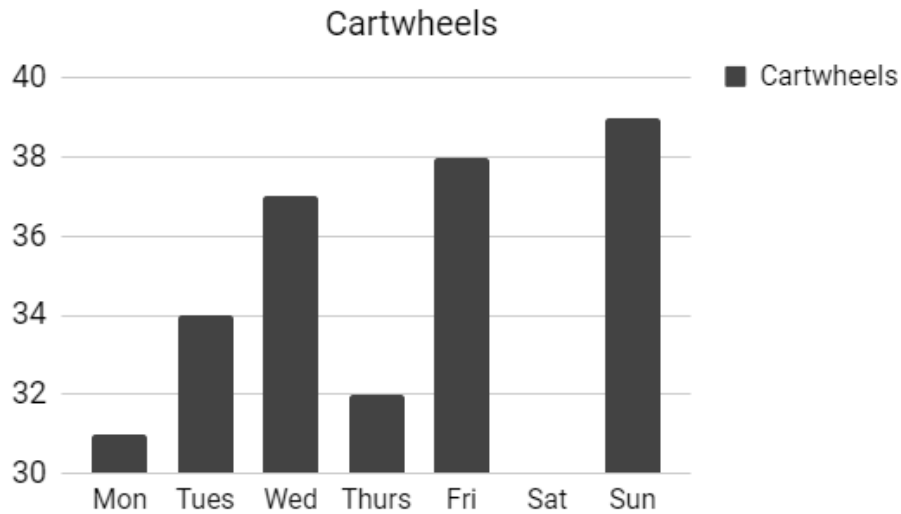
---

d) **How many** exercises did John complete **in total** over the week? Write your answer in the space below.

---

---

12. Sophie records the **number of cartwheels** she **completes each day** for a week. She draws the graph below.



a) On which **day** did she complete the **4<sup>th</sup> fewest number of cartwheels**? Write your answer in the space below.

---

b) On which **day** did she complete the **5<sup>th</sup> most number of cartwheels**? Write your answer in the space below.

---

c) Which **day** had **more** cartwheels than **Saturday**, but **fewer** cartwheels than **Thursday**? Write your answer in the space below.

---

d) **How many** cartwheels did Sophie complete **in total** over the week? Write your answer in the space below.

---

---

**Answers**

- |                      |                   |                 |               |
|----------------------|-------------------|-----------------|---------------|
| <b>1. a) Wed</b>     | <b>b) Tues</b>    | <b>c) Sat</b>   | <b>d) 25</b>  |
| <b>2. a) Sun</b>     | <b>b) Sat</b>     | <b>c) Thurs</b> | <b>d) 29</b>  |
| <b>3. a) Tues</b>    | <b>b) Wed/Fri</b> | <b>c) Sun</b>   | <b>d) 37</b>  |
| <b>4. a) Sun</b>     | <b>b) Sat</b>     | <b>c) Mon</b>   | <b>d) 34</b>  |
| <b>5. a) Sun</b>     | <b>b) Fri</b>     | <b>c) Mon</b>   | <b>d) 86</b>  |
| <b>6. a) Sat</b>     | <b>b) Thurs</b>   | <b>c) Thurs</b> | <b>d) 40</b>  |
| <b>7. a) Sat</b>     | <b>b) Tues</b>    | <b>c) Mon</b>   | <b>d) 119</b> |
| <b>8. a) Mon/Sat</b> | <b>b) Tues</b>    | <b>c) Thurs</b> | <b>d) 58</b>  |
| <b>9. a) Thurs</b>   | <b>b) Wed/Fri</b> | <b>c) Thurs</b> | <b>d) 182</b> |
| <b>10.a) Mon</b>     | <b>b) Fri</b>     | <b>c) Thurs</b> | <b>d) 237</b> |
| <b>11.a) Mon</b>     | <b>b) Mon</b>     | <b>c) Wed</b>   | <b>d) 43</b>  |
| <b>12.a) Tues</b>    | <b>b) Thurs</b>   | <b>c) Mon</b>   | <b>d) 241</b> |